

Please check the examination details below before entering your candidate information

Candidate surname

Other names

Centre Number

Candidate Number

Pearson Edexcel International GCSE

Friday 10 November 2023

Morning (Time: 2 hours)

Paper
reference

4MA1/2F

Mathematics A

PAPER 2F

Foundation Tier



You must have: Ruler graduated in centimetres and millimetres, protractor, pair of compasses, pen, HB pencil, eraser, calculator. Tracing paper may be used.

Total Marks

Instructions

- Use **black** ink or ball-point pen.
- **Fill in the boxes** at the top of this page with your name, centre number and candidate number.
- Answer **all** questions.
- Without sufficient working, correct answers may be awarded no marks.
- Answer the questions in the spaces provided
– *there may be more space than you need.*
- **Calculators may be used.**
- You must **NOT** write anything on the formulae page.
- Anything you write on the formulae page will gain **NO** credit.

Information

- The total mark for this paper is 100.
- The marks for **each** question are shown in brackets
– *use this as a guide as to how much time to spend on each question.*

Advice

- Read each question carefully before you start to answer it.
- Check your answers if you have time at the end.

Turn over ►

P73467A

©2023 Pearson Education Ltd.
Z:1/1/1/1/1/1/1/

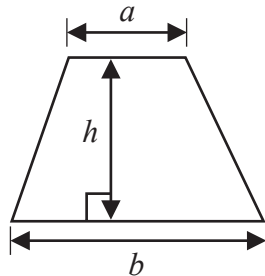



Pearson

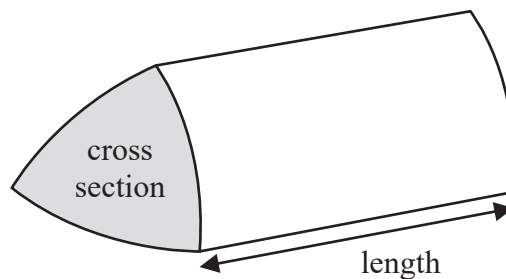
International GCSE Mathematics

Formulae sheet – Foundation Tier

Area of trapezium = $\frac{1}{2}(a + b)h$

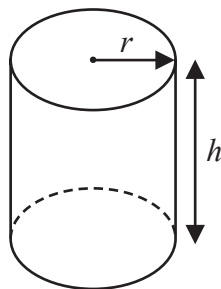


Volume of prism = area of cross section \times length



Volume of cylinder = $\pi r^2 h$

Curved surface area of cylinder = $2\pi r h$



DO NOT WRITE IN THIS AREA

DO NOT WRITE IN THIS AREA

DO NOT WRITE IN THIS AREA



Answer ALL TWENTY SIX questions.

Write your answers in the spaces provided.

You must write down all the stages in your working.

- 1** The table gives information about the weight of sugar produced by each of five countries in one year.

Country	Weight (tonnes)
Japan	72 900
Barbados	15 745
Kenya	592 668
Gabon	23 787
Malaysia	28 149

- (a) Write the number 28 149 in words.

.....

 (1)

- (b) Which of these five countries produced the greatest weight of sugar?

.....
 (1)

- (c) Write down the value of the 8 in the number 23 787

.....
 (1)

- (d) Write the number 15 745 correct to the nearest thousand.


.....
 (1)

(Total for Question 1 is 4 marks)



- 2 The pictogram gives information about the number of parcels a company posted on each of four days last week.

Monday	
Tuesday	
Wednesday	
Thursday	
Friday	



Represents 16 parcels

- (a) How many parcels were posted on Tuesday?

.....
(1)

24 parcels were posted on Friday.

- (b) Show this information on the pictogram.

(1)

More parcels were posted on Wednesday than on Monday.

- (c) How many more?

.....
(1)

- (d) Find the ratio

number of parcels posted on Monday : number of parcels posted on Thursday
Give your answer in its simplest form.

.....
(2)

(Total for Question 2 is 5 marks)



DO NOT WRITE IN THIS AREA

DO NOT WRITE IN THIS AREA

DO NOT WRITE IN THIS AREA

3 (a) Write 0.03 as a fraction.

.....
(1)

(b) Write 0.9 as a percentage.

..... %
(1)

(c) Write these decimals in order of size.
Start with the smallest decimal.

0.4 0.48 0.204 0.24 0.408

.....
(1)

(d) Work out $0.93 + \frac{7}{10}$

Give your answer as a decimal.

.....
(1)

(Total for Question 3 is 4 marks)



4 Barney went for 4 walks on Tuesday.

The lengths of the walks were

- 800 metres
- 2 kilometres
- 1.7 kilometres
- x metres

The total length of the 4 walks was 6250 metres.

Work out the value of x

$$x = \dots\dots\dots$$

(Total for Question 4 is 3 marks)

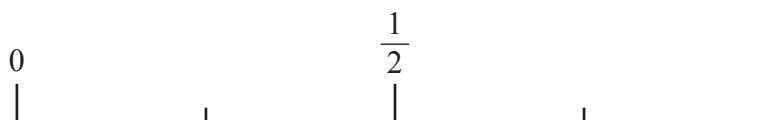
5 There are 8 counters in a bag.

6 of these counters are orange.

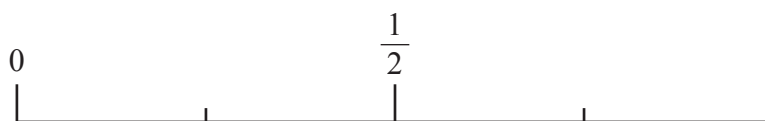
The rest of the counters are purple.

Delilah takes at random a counter from the bag.

(i) On the probability scale below, mark with a cross (\times) the probability that the counter is orange.



(ii) On the probability scale below, mark with a cross (\times) the probability that the counter is yellow.




(Total for Question 5 is 2 marks)



6 Here is a centimetre grid.


(a) On the grid, draw a right-angled triangle.



(1)

Here is a centimetre grid.

(b) On the grid, draw a rectangle with an area of 20 cm^2



(2)

(Total for Question 6 is 3 marks)



7 (a) Write 4 30 pm as a time in the 24-hour clock.

.....
(1)

Here is part of a bus timetable from Beetown to Pilton.

Beetown	08 45
Corthill	09 50
Pilton	10 36

The bus should take more time to get from Beetown to Corthill than from Corthill to Pilton.

- (b) How much more time?
Give your answer in minutes.

..... minutes
(3)

(Total for Question 7 is 4 marks)



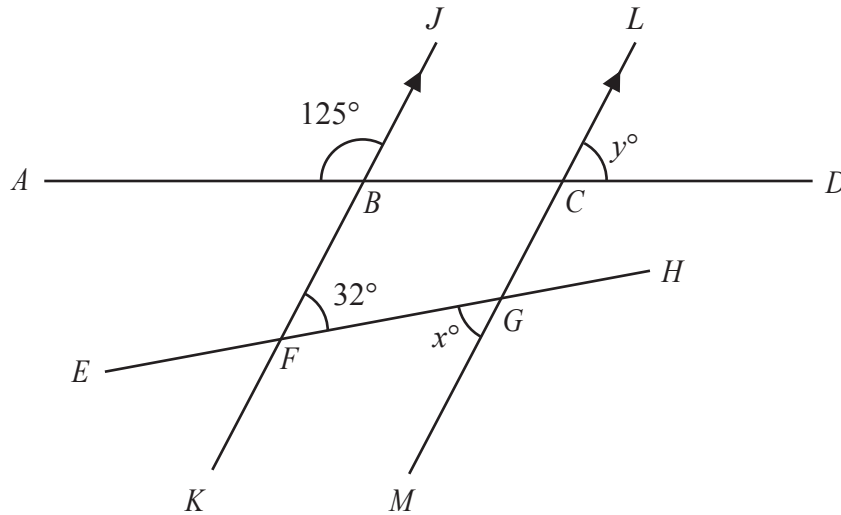


Diagram **NOT**
accurately drawn

$ABCD$ and $EFGH$ are straight lines.
 KBJ and MGL are parallel straight lines.

angle $ABJ = 125^\circ$ angle $BFG = 32^\circ$ angle $FGM = x^\circ$ angle $LCD = y^\circ$

(a) Write down the value of x

$x = \dots\dots\dots$
(1)

(b) (i) Work out the value of y

$y = \dots\dots\dots$
(2)

(ii) Give a reason for your answer to (b) (i)

$\dots\dots\dots$
(1)

(Total for Question 8 is 4 marks)



- 9 3 kg of carrots and 5 kg of potatoes cost a total of 207 rand.
2 kg of the carrots cost 48 rand.

Work out the cost of 1 kg of potatoes.

..... rand

(Total for Question 9 is 4 marks)

DO NOT WRITE IN THIS AREA

DO NOT WRITE IN THIS AREA

DO NOT WRITE IN THIS AREA



DO NOT WRITE IN THIS AREA

10 Here is a number machine.



When the input is 7 the output is 60

(a) Work out the value of y

$$y = \dots\dots\dots (2)$$

Here is a different number machine.



The input is x

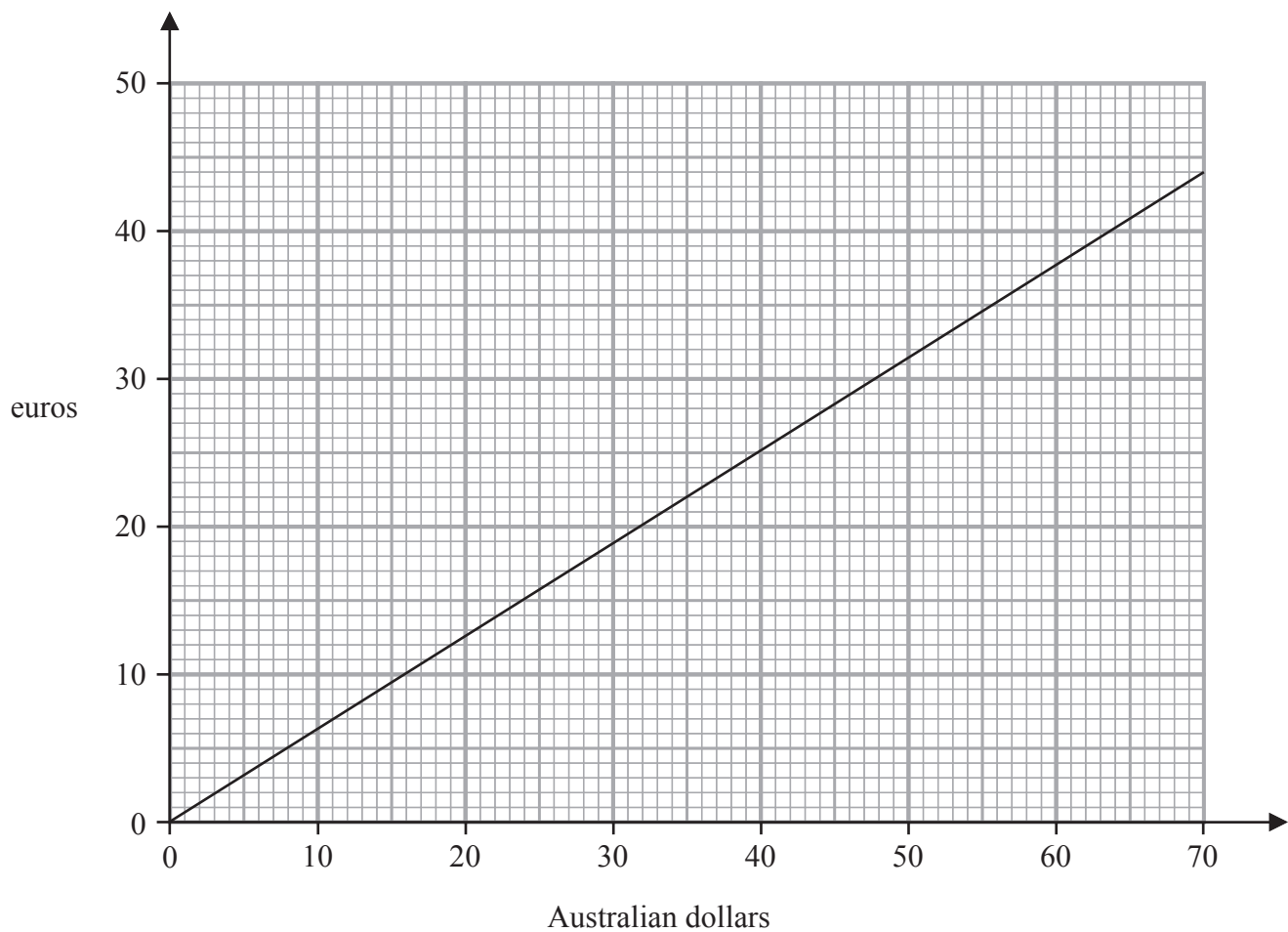
(b) Write down an expression, in terms of x , for the output.

$$\dots\dots\dots (2)$$

(Total for Question 10 is 4 marks)



11 The graph below can be used to change between Australian dollars and euros.



(a) Use the graph to change

(i) 35 Australian dollars to euros

..... euros
(1)

(ii) 20 euros to Australian dollars

..... Australian dollars
(1)

Lachlan changes 500 Australian dollars to euros.

(b) Work out how many euros he should receive.

..... euros
(2)

(Total for Question 11 is 4 marks)



DO NOT WRITE IN THIS AREA

DO NOT WRITE IN THIS AREA

DO NOT WRITE IN THIS AREA

12 (a) Expand $x(x + 3)$

.....
(1)

(b) Factorise $8p + 10$

.....
(1)

(c) Make e the subject of $y = eh - f$

.....
(2)

Janya thinks of a whole number.

She calls her whole number w

Janya writes down this information about her whole number.

$$w > 7 \quad \text{and} \quad w \leq 10$$

(d) Write down the possible values of w

.....
(2)

(Total for Question 12 is 6 marks)



DO NOT WRITE IN THIS AREA

DO NOT WRITE IN THIS AREA

DO NOT WRITE IN THIS AREA

13 Bella buys 150 football shirts for a total cost of 1800 dollars.

She gives 10% of the shirts to the local football team.

Bella sells the rest of the shirts for g dollars each.

She makes a total profit of 360 dollars.

Work out the value of g

$g = \dots\dots\dots$

(Total for Question 13 is 4 marks)



DO NOT WRITE IN THIS AREA

DO NOT WRITE IN THIS AREA

DO NOT WRITE IN THIS AREA

14 Work out the value of $\frac{5.2^2 + 8.7}{\sqrt{14.5}}$

Write down all the figures on your calculator display.

.....
(Total for Question 14 is 2 marks)

15 Yuan sells fudge in small bags and in large bags.

<p>Small bag Weight 150 g Cost £1.80</p>

<p>Large bag Weight 400 g Cost £5</p>
--

Work out which bag is the better value for money.
Show your working clearly.

.....
(Total for Question 15 is 3 marks)



16

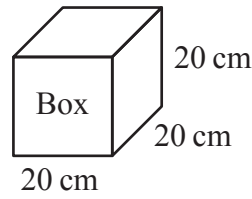
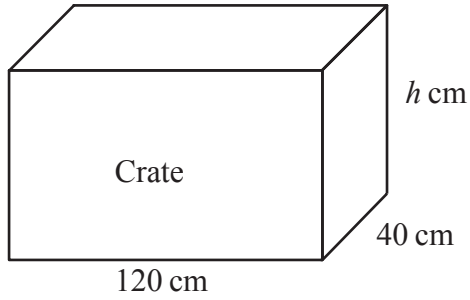


Diagram **NOT** accurately drawn

A crate is in the shape of a cuboid with inside lengths of 120 cm, 40 cm and h cm
The crate has a lid.

Micah has 48 boxes.

Each box is in the shape of a cube 20 cm by 20 cm by 20 cm

Micah wants to put all the boxes in the crate and shut the lid.

Work out the least possible value of h

DO NOT WRITE IN THIS AREA

DO NOT WRITE IN THIS AREA

DO NOT WRITE IN THIS AREA

(Total for Question 16 is 4 marks)



DO NOT WRITE IN THIS AREA

DO NOT WRITE IN THIS AREA

DO NOT WRITE IN THIS AREA

17 The table shows information about the lengths, in minutes, of 50 telephone calls.

Length of telephone call (m minutes)	Frequency
$0 < m \leq 5$	8
$5 < m \leq 10$	2
$10 < m \leq 15$	6
$15 < m \leq 20$	4
$20 < m \leq 25$	12
$25 < m \leq 30$	18

(a) Write down the modal class.

.....
(1)

(b) Work out an estimate for the total length, in minutes, of these telephone calls.

..... minutes
(3)

(Total for Question 17 is 4 marks)



P 7 3 4 6 7 A 0 1 7 2 4

18 The diagram shows triangle ABC and triangle ECD

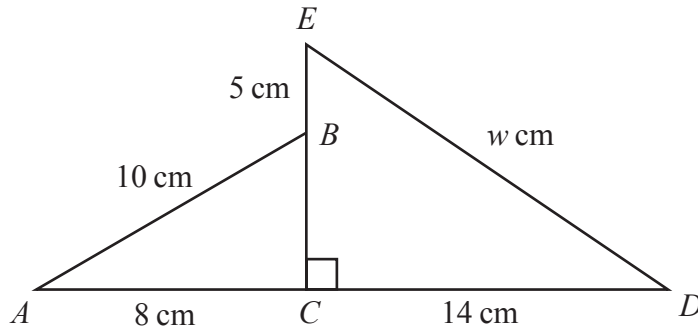


Diagram **NOT** accurately drawn

ACD and EBC are straight lines.

$$AB = 10 \text{ cm} \quad AC = 8 \text{ cm} \quad EB = 5 \text{ cm} \quad CD = 14 \text{ cm} \quad ED = w \text{ cm}$$

Work out the value of w

Give your answer correct to one decimal place.

$$w = \dots\dots\dots$$

(Total for Question 18 is 4 marks)

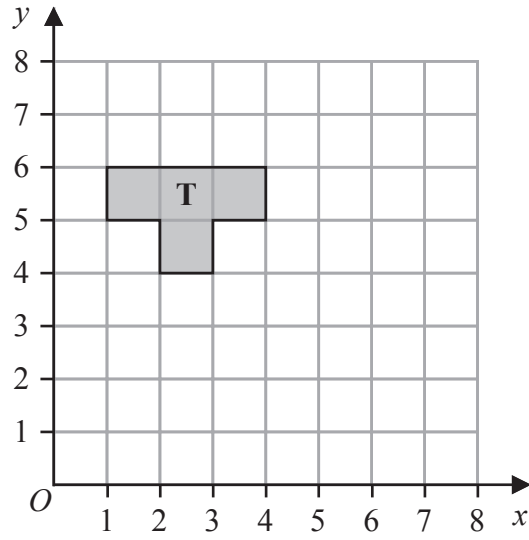
DO NOT WRITE IN THIS AREA

DO NOT WRITE IN THIS AREA

DO NOT WRITE IN THIS AREA



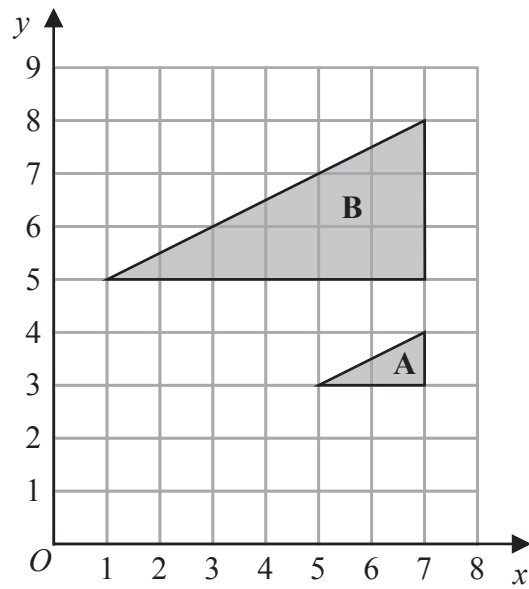
DO NOT WRITE IN THIS AREA



(a) Reflect shape **T** in the line $y = x$

(2)

DO NOT WRITE IN THIS AREA



(b) Describe fully the single transformation that maps triangle **A** onto triangle **B**

(3)

(Total for Question 19 is 5 marks)

DO NOT WRITE IN THIS AREA



20 (a) Solve $\frac{2x+5}{6} = 2x-5$

Show clear algebraic working.

$x = \dots\dots\dots$
(3)

(b) Simplify $h^{15} \div h^3$

$\dots\dots\dots$
(1)

(c) Simplify fully $(2g^3k^5)^4$

$\dots\dots\dots$
(2)

(d) Given that $\frac{y^5 \times y^n}{y^7} = y^{12}$

work out the value of n

$n = \dots\dots\dots$
(2)

(Total for Question 20 is 8 marks)



DO NOT WRITE IN THIS AREA

DO NOT WRITE IN THIS AREA

DO NOT WRITE IN THIS AREA

21 Avril bakes a cake.

She uses flour, butter and sugar such that

$$\text{weight of flour : weight of butter} = 6 : 5$$

$$\text{weight of butter : weight of sugar} = 3 : 2$$

Avril uses 120 grams of sugar.

Work out the weight of flour Avril uses.

..... grams

(Total for Question 21 is 3 marks)



22 Show that $3\frac{3}{7} \div 2\frac{2}{3} = 1\frac{2}{7}$

(Total for Question 22 is 3 marks)

- 23 Hermione buys a boat for \$26 800
The value of the boat depreciates by 8% each year.
Work out the value of the boat at the end of 3 years.
Give your answer correct to the nearest dollar.

\$.....

(Total for Question 23 is 3 marks)

DO NOT WRITE IN THIS AREA

DO NOT WRITE IN THIS AREA

DO NOT WRITE IN THIS AREA



DO NOT WRITE IN THIS AREA

DO NOT WRITE IN THIS AREA

DO NOT WRITE IN THIS AREA

- 24 The mean number of goals scored by a hockey team in 8 matches is 6
The team plays 2 more matches and scores k goals in each match.
The mean number of goals scored by the hockey team in the 10 matches is 7

Work out the value of k

$k = \dots\dots\dots$

(Total for Question 24 is 3 marks)

- 25 A straight line passes through the points with coordinates $(0, -3)$ and $(2, 0)$
Find an equation of the line.

.....

(Total for Question 25 is 2 marks)



26 The diagram shows a hexagon $ABCDEF$

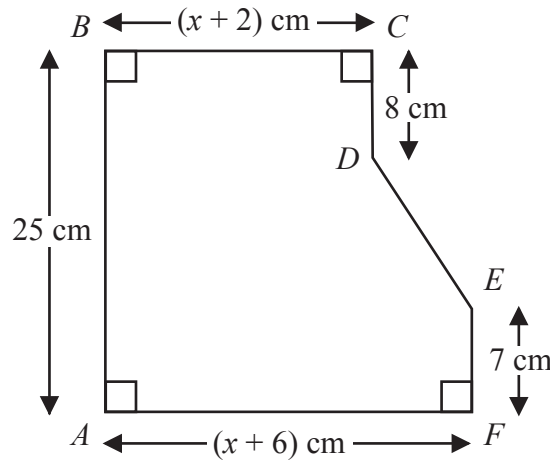


Diagram **NOT**
accurately drawn

$$AB = 25 \text{ cm} \quad BC = (x + 2) \text{ cm} \quad CD = 8 \text{ cm} \quad EF = 7 \text{ cm} \quad AF = (x + 6) \text{ cm}$$

The area of hexagon $ABCDEF$ is 258 cm^2

Work out the value of x

$$x = \dots\dots\dots$$

(Total for Question 26 is 5 marks)

TOTAL FOR PAPER IS 100 MARKS

DO NOT WRITE IN THIS AREA

DO NOT WRITE IN THIS AREA

DO NOT WRITE IN THIS AREA

