


Please check the examination details below before entering your candidate information

Candidate surname <b>Eng. Ahmed Sherif</b>	Other names	
<b>Pearson Edexcel International GCSE</b>	Centre Number <input type="text"/> <input type="text"/> <input type="text"/> <input type="text"/> <input type="text"/> <input type="text"/>	Candidate Number <input type="text"/> <input type="text"/> <input type="text"/> <input type="text"/> <input type="text"/> <input type="text"/>
Time 2 hours	Paper reference <b>4MA1/1H</b>	
<b>Mathematics A</b> <b>PAPER 1H</b> <b>Higher Tier</b> <b>+201003773995</b> 		
<b>You must have:</b> Ruler graduated in centimetres and millimetres, protractor, compasses, pen, HB pencil, eraser, calculator. Tracing paper may be used.	Total Marks <input type="text"/>	

### Instructions

- Use **black** ink or ball-point pen.
- **Fill in the boxes** at the top of this page with your name, centre number and candidate number.
- Answer **all** questions.
- Without sufficient working, correct answers may be awarded no marks.
- Answer the questions in the spaces provided – *there may be more space than you need.*
- **Calculators may be used.**
- You must **NOT** write anything on the formulae page. Anything you write on the formulae page will gain **NO** credit.

### Information


- The total mark for this paper is 100.
- The marks for **each** question are shown in brackets – *use this as a guide as to how much time to spend on each question.*

### Advice

- Read each question carefully before you start to answer it.
- Check your answers if you have time at the end.
- Good luck with your examination.

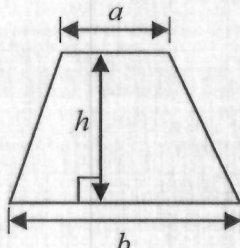
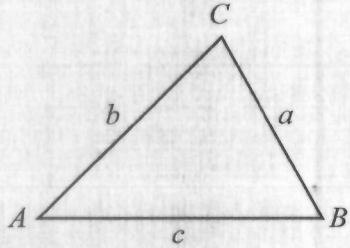
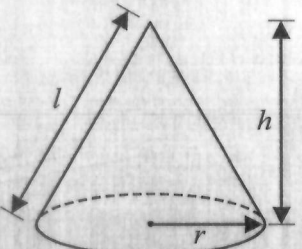
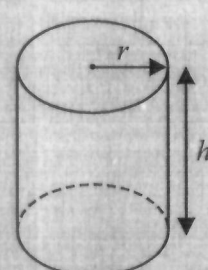
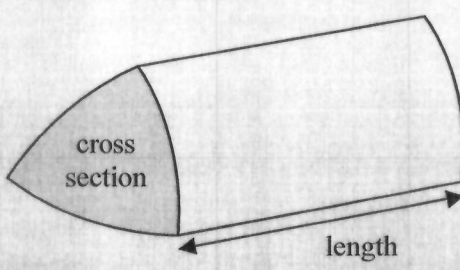
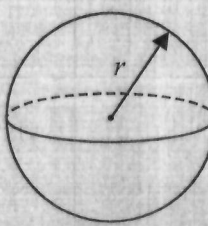
Turn over ▶

P65914A  
©2021 Pearson Education Ltd.  
1/1/1/1/1/1



  
Pearson

**International GCSE Mathematics**  
**Formulae sheet – Higher Tier**

<p><b>Arithmetic series</b></p> <p>Sum to <math>n</math> terms, <math>S_n = \frac{n}{2} [2a + (n-1)d]</math></p>	<p><b>Area of trapezium</b> <math>= \frac{1}{2}(a+b)h</math></p> 
<p><b>The quadratic equation</b></p> <p>The solutions of <math>ax^2 + bx + c = 0</math> where <math>a \neq 0</math> are given by:</p> $x = \frac{-b \pm \sqrt{b^2 - 4ac}}{2a}$	<p><b>In any triangle ABC</b></p> <p><b>Sine Rule</b> <math>\frac{a}{\sin A} = \frac{b}{\sin B} = \frac{c}{\sin C}</math></p> <p><b>Cosine Rule</b> <math>a^2 = b^2 + c^2 - 2bc \cos A</math></p> <p><b>Area of triangle</b> <math>= \frac{1}{2}ab \sin C</math></p>
<p><b>Trigonometry</b></p> 	<p><b>Volume of cone</b> <math>= \frac{1}{3}\pi r^2 h</math></p> <p><b>Curved surface area of cone</b> <math>= \pi r l</math></p> 
<p><b>Volume of cylinder</b> <math>= \pi r^2 h</math></p> <p><b>Curved surface area of cylinder</b> <math>= 2\pi r h</math></p> 	<p><b>Volume of prism</b> <math>=</math> area of cross section <math>\times</math> length</p>  <p><b>Volume of sphere</b> <math>= \frac{4}{3}\pi r^3</math></p> <p><b>Surface area of sphere</b> <math>= 4\pi r^2</math></p> 

DO NOT WRITE IN THIS AREA

DO NOT WRITE IN THIS AREA

DO NOT WRITE IN THIS AREA



Answer all TWENTY SIX questions.

Write your answers in the spaces provided.

You must write down all the stages in your working.

1 A plane flew from Madrid to Dubai.

The distance the plane flew was 5658 km.

The flight time was 8 hours 12 minutes.

Work out the average speed of the plane.

$$\rightarrow \frac{12}{60} = 0.2$$

$$\text{Avg. Speed} = \frac{5658}{8.2} = 690 \text{ km/h}$$

Eng. Ahmed Sherif  
#

690 km/h

(Total for Question 1 is 3 marks)


2 Here are the first 4 terms of an arithmetic sequence.

$$85 \quad -6 \quad 79 \quad -6 \quad 73 \quad -6 \quad 67$$

Find an expression, in terms of  $n$ , for the  $n$ th term of the sequence.

$$-6n + 91$$

(Total for Question 2 is 2 marks)



DO NOT WRITE IN THIS AREA

DO NOT WRITE IN THIS AREA

DO NOT WRITE IN THIS AREA

3

Eng. Ahmed Sherif  
#  
+201003773995

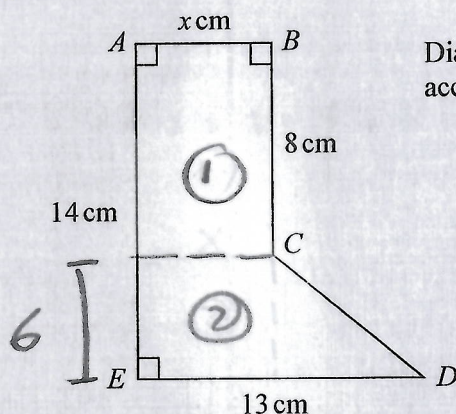


Diagram NOT  
accurately drawn

The diagram shows the shape  $ABCDE$ .

The area of the shape is  $91.8 \text{ cm}^2$

Work out the value of  $x$ .

$$A_1 = 8x$$

$$A_2 = \frac{1}{2} (x+13)(6) = 3x+39$$

$$8x + 3x + 39 = 91.8$$

$$11x + 39 = 91.8$$

$$11x = 52.8$$

$$x = 4.8$$

$x =$


4.8

(Total for Question 3 is 4 marks)

DO NOT WRITE IN THIS AREA

DO NOT WRITE IN THIS AREA

DO NOT WRITE IN THIS AREA



P 6 5 9 1 4 A 0 4 2 8

4 On a farm there are chickens, ducks and pigs.

The ratio of the number of chickens to the number of ducks is 7:2

The ratio of the number of ducks to the number of pigs is 5:9

There are 36 pigs on the farm.

Work out the number of chickens on the farm.

Eng. Ahmed Sherif

Chi : Duc : Pigs #

7 : Ducks : Pigs

5 : 9

(?) : 36

$$\text{Ducks} = \frac{5 \times 36}{9} = \underline{\underline{20}} \text{ Ducks}$$


Chickens : Ducks

7 : 2

(?) : 20

$$\text{Chickens} = \frac{20 \times 7}{2} = \underline{\underline{70}} \text{ chickens}$$

(Total for Question 4 is 3 marks)



DO NOT WRITE IN THIS AREA

DO NOT WRITE IN THIS AREA

DO NOT WRITE IN THIS AREA

5 (a) Expand and simplify  $3x(2x + 3) - x(3x + 5)$

$$6x^2 + 9x - 3x^2 - 5x$$

$$3x^2 + 4x = x(3x + 4)$$

Eney. Ahmed Sherif

#

(b) Make  $t$  the subject of the formula  $p = at - d$

$$p + d = at$$
$$t = \frac{p + d}{a}$$

(2)

Given that  $\frac{w^5 \times w^n}{w^3} = w^{10}$

(c) work out the value of  $n$ .

$$\frac{w^{5+n}}{w^3} = w^{10}$$
$$w^{n+2} = w^{10}$$

$n =$

$$n = 8$$

(Total for Question 5 is 6 marks)

$$n + 2 = 10$$

$$n = 8$$

DO NOT WRITE IN THIS AREA

DO NOT WRITE IN THIS AREA

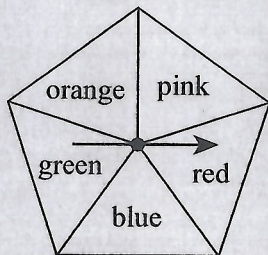
DO NOT WRITE IN THIS AREA



P 6 5 9 1 4 A 0 6 2 8

Eng. Ahmed Sherif #

6 Grace has a biased 5-sided spinner.



Grace is going to spin the arrow on the spinner once.

The table below gives the probabilities that the spinner will land on red or on blue or on green.

Colour	Red	Blue	Green	Orange	Pink
Probability	0.20	0.12	0.08	0.45	0.15

The probability that the spinner will land on orange is 3 times the probability that the spinner will land on pink.

(a) Work out the probability that the spinner will land on orange.

$$3x + x + 0.2 + 0.12 + 0.08 = 1$$

$$4x = 0.6$$

$$x = 0.15$$

$$\text{orange} = 3 \times 0.15$$

$$= 0.45$$

(3)

Grace spins the arrow on the spinner 150 times.


(b) Work out an estimate for the number of times the spinner lands on blue.

$$\text{Number} = 150 \times 0.12$$

$$= 18 \text{ times}$$

(2)

(Total for Question 6 is 5 marks)



DO NOT WRITE IN THIS AREA

DO NOT WRITE IN THIS AREA

DO NOT WRITE IN THIS AREA

Eng. Ahmed Sherif  
✱

7  $-4 \leq 2y < 6$   $\div 2$

y is an integer.

(a) Write down all the possible values of y.

$-2 \leq y < 3$       $-4, -2, -1, 0, 1, 2$   
(2)


(b) Solve the inequality  $7t - 3 \leq 2t + 31$

Show your working clearly.

$5t \leq 34$   
 $t \leq \frac{34}{5}$

(2)

(Total for Question 7 is 4 marks)





8 The table shows the populations of five countries.

Country	Population
China	$1.4 \times 10^9$
Germany	$8.2 \times 10^7$
Sweden	$9.9 \times 10^6$
Fiji	$9.1 \times 10^5$
Malta	$4.3 \times 10^5$

Eng. Ahmed Sherif

#

- (a) Work out the difference between the population of China and the population of Germany. Give your answer in standard form.

$$1.4 \times 10^9 - 8.2 \times 10^7$$

=

$$1.318 \times 10^9$$

(2)

Given that

$$\text{population of Fiji} = \frac{1}{k} \times \text{population of Sweden}$$

- (b) work out the value of  $k$ . Give your answer correct to the nearest whole number.

$$9.1 \times 10^5 = \frac{9.9 \times 10^6}{k}$$

$$k = \frac{9.9 \times 10^6}{9.1 \times 10^5} = 10.88 = \underline{\underline{11}}$$

$k =$  11 (2)

(Total for Question 8 is 4 marks)



DO NOT WRITE IN THIS AREA

9 (a) Factorise fully  $25a^4c^7d + 45a^9c^3h$

$$5a^4c^3(5c^4d + 9a^5h) \quad (2)$$

(b) Solve  $(2x + 5)^2 = (2x + 3)(2x - 1)$

$$\cancel{4x^2} + 20x + 25 = \cancel{4x^2} - 2x + 6x - 3$$

$$20x - 4x = -3 - 25$$

$$16x = -28$$

$$x = \frac{-7}{4}$$

Enej. Ahmed Sherif  
#

$$x = \frac{-7}{4} \quad (3)$$

(Total for Question 9 is 5 marks)

10 Jethro has sat 5 tests.

Each test was marked out of 100 and Jethro's mean mark for the 5 tests is 74

Jethro has to sit one more test that is also to be marked out of 100

Jethro wants his mean mark for all 6 tests to be at least 77

Work out the least mark that Jethro needs to get for the last test.

$$\text{Mean}_{5 \text{ tests}} = \frac{\text{Sum}_{5 \text{ tests}}}{5} = 74$$

$$\text{Sum}_{5 \text{ tests}} = 370$$

$$\text{Mean}_{6 \text{ tests}} = \frac{370 + X}{6} = 77$$

$$= X + 370 = 462$$

92

(Total for Question 10 is 3 marks)

$$X = 92$$



P 6 5 9 1 4 A 0 1 0 2 8

11  $\sqrt{2} \times 16 = 2^x$

- (a) Find the value of  $x$ .  
Show your working clearly.

$$(2)^{1/2} (2)^4 = 2^{9/2}$$

Eng. Ahmed Sherif

#

$x = \frac{9}{2}$   
(2)


$$\frac{(11^{-6})^5}{11^4} = 11^n$$

- (b) Find the value of  $n$ .  
Show your working clearly.

$$\frac{11^{-30}}{11^4} = 11^{-30-4} = 11^{-34}$$

$n = -34$   
(2)

(Total for Question 11 is 4 marks)



DO NOT WRITE IN THIS AREA

DO NOT WRITE IN THIS AREA

DO NOT WRITE IN THIS AREA

12 The diagram shows a sector of a circle with radius 7 cm.

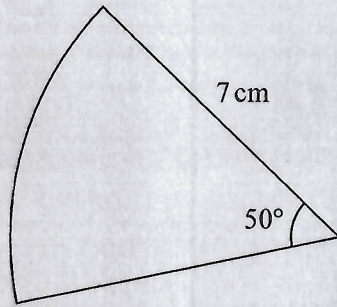


Diagram NOT accurately drawn

Eng. Ahmed Sharif

#

Work out the length of the arc of the sector.  
Give your answer correct to one decimal place.

$$\begin{aligned} \text{Length of the arc} &= \frac{50}{360} \times 2\pi \times 7 \\ &= 6.1086 \approx \underline{\underline{6.1}} \text{ cm} \end{aligned}$$


6.1 cm

(Total for Question 12 is 2 marks)

DO NOT WRITE IN THIS AREA

DO NOT WRITE IN THIS AREA

DO NOT WRITE IN THIS AREA



13 Expand and simplify  $4x(3x + 1)(2x - 3)$   
Show your working clearly.

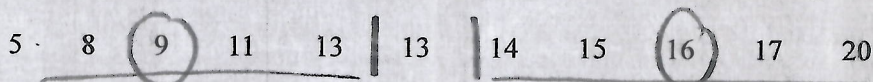
Eng. Ahmed Sherif  
#

$$4x(6x^2 - 9x + 2x - 3) = 4x(6x^2 - 7x - 3)$$

$$= 24x^3 - 28x^2 - 12x$$

(Total for Question 13 is 3 marks)

14 Here is the number of goals that Henri's team scored one summer in each water polo match.




Find the interquartile range of the numbers of goals.  
Show your working clearly.

$$UQ = 16, LQ = 9$$

$$IQR = 16 - 9 = 7$$

(Total for Question 14 is 2 marks)



- 15  $P, Q$  and  $R$  are points on a circle, centre  $O$ .  
 $TRV$  is the tangent to the circle at  $R$ .

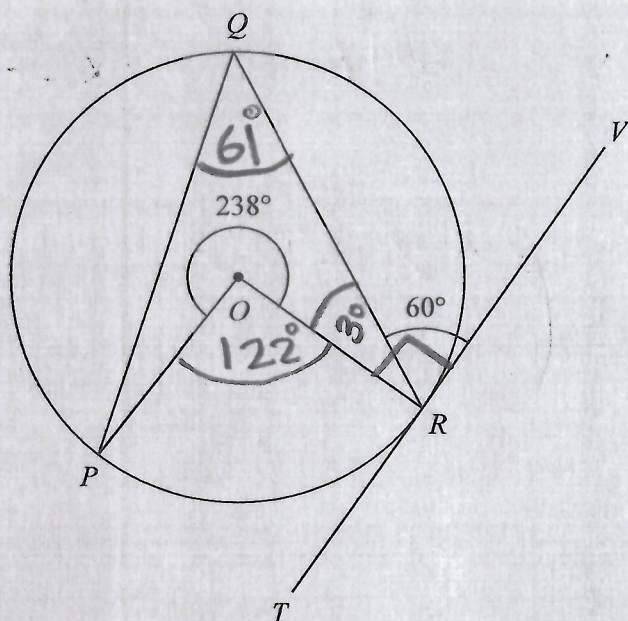


Diagram NOT  
 accurately drawn

Eng. Ahmed Sherif  
 #

Reflex angle  $POR = 238^\circ$   
 Angle  $QRV = 60^\circ$

Calculate the size of angle  $OPQ$ .  
 Give a reason for each stage of your working.

$$\text{Angle } (POR) = 360^\circ - 238^\circ = 122^\circ \quad \text{"Circum. Point"}$$

$$\text{Angle } (PQR) = \frac{122}{2} = 61^\circ \quad \text{"Angle at Circum. } \frac{1}{2} \text{ Angle at center"}$$


$$\text{Angle } (ORV) = 90^\circ \quad \text{"Radius and tangent"}$$

$$\text{Angle } (ORQ) = 90^\circ - 60 = 30^\circ$$

$$\text{Angle } (OPQ) =$$

(Total for Question 15 is 4 marks)

$$360 - (61 + 238 + 30) = 31^\circ$$



Eng. Ahmed Sherif #

16 Use algebra to show that the recurring decimal  $0.2\bar{8}1\bar{3} = \frac{557}{1980}$

$$x = 0.2\bar{8}1\bar{3}1\bar{3}1\bar{3}$$

$$10000x = 2\bar{8}13.1\bar{3}1\bar{3}$$

$$\ominus 100x = 2\bar{8}.1\bar{3}1\bar{3}$$

$$9900x = 2785$$

$$x = \frac{2785}{9900}$$

$$x = \frac{557}{1980}$$

(Total for Question 16 is 2 marks)

17 Using algebra, prove that, given any 3 consecutive even numbers, the difference between the square of the largest number and the square of the smallest number is always 8 times the middle number.

$$2n+2, 2n+4, 2n+6$$

$$(2n+6)^2 - (2n+2)^2$$


$$4n^2 + 24n + 36 - [4n^2 + 8n + 4]$$

$$= 4n^2 + 24n + 36 - 4n^2 - 8n - 4$$

$$= 16n + 32 = 8(2n+4)$$

8 times the middle term.

(Total for Question 17 is 3 marks)



DO NOT WRITE IN THIS AREA

DO NOT WRITE IN THIS AREA

DO NOT WRITE IN THIS AREA

DO NOT WRITE IN THIS AREA

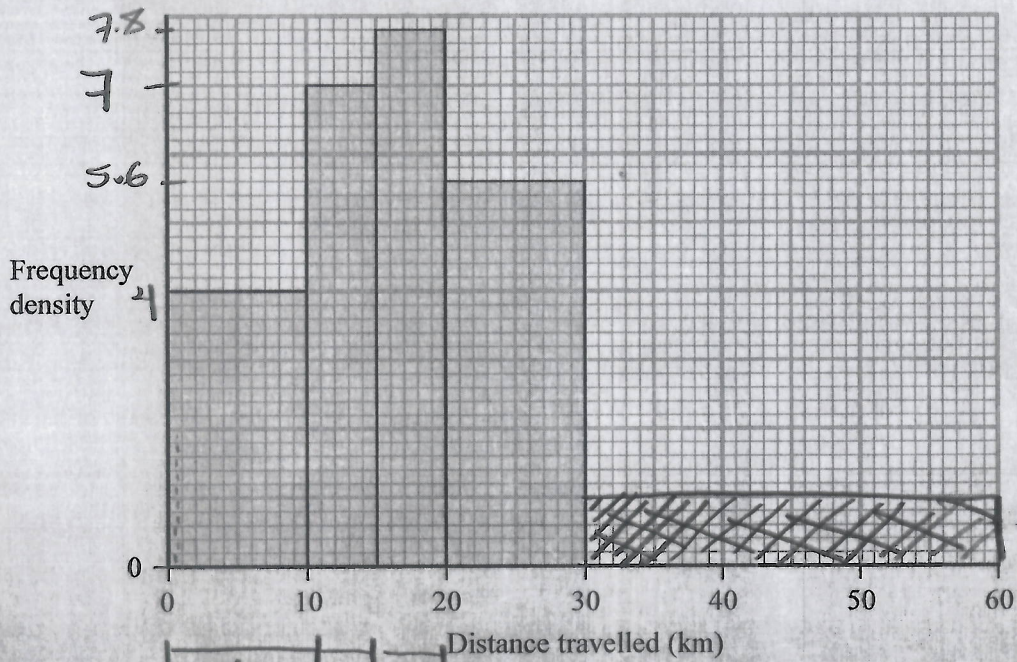
18 The table and histogram give information about the distance travelled, in order to get to work, by each person working in a large store.

*Eng. Ahmed Sherif  
+20603773995*


Distance ( $d$ km)	Frequency
$0 \leq d < 10$	40
$10 \leq d < 15$	35
$15 \leq d < 20$	39
$20 \leq d < 30$	56
$30 \leq d < 60$	30

*C.W*  
10  
5  
5  
10  
30

*F.D*  
4  
7  
7.8  
5.6  
1



$\square = 0.2$   
10 5 5 10





Using the information in the table and in the histogram,

(a) complete the table,

Eng. Ahmed Sherif

#

(2)

(b) complete the histogram.

(1)

One of the people working in the store is chosen at random.

(c) Work out an estimate for the probability that the distance travelled by this person, in order to get to work, was greater than 25 km.

→ Total = 200

greater than 25 km


=  $5 \times 5.6 + 30 = 58$

=  $\frac{58}{200}$

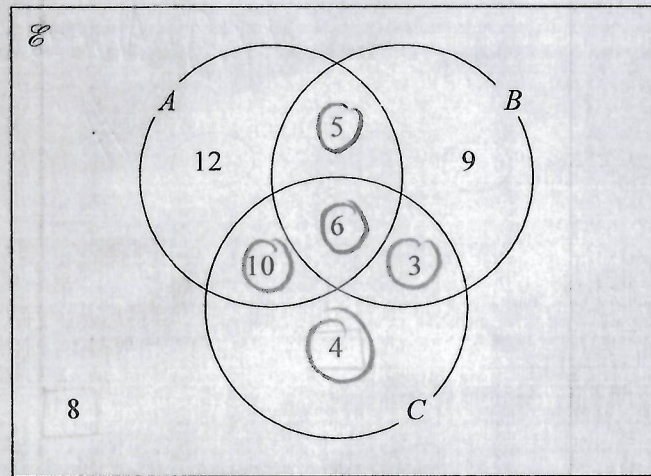
(2)

(Total for Question 18 is 5 marks)

DO NOT WRITE IN THIS AREA



19 The Venn diagram shows a universal set,  $\mathcal{E}$  and sets  $A$ ,  $B$  and  $C$ .



Eng. Ahmed sherif

#

12, 5, 9, 10, 6, 3, 4 and 8 represent the numbers of elements.

Find

(i)  $n(A \cup B) = 12 + 5 + 6 + 10 + 9 + 3$

45  
(1)

(ii)  $n(A' \cap B') = 8 + 4$

12  
(1)

(iii)  $n([A \cap B] \cup C) = 5 + 6 + 10 + 3 + 4$


28  
(1)

(Total for Question 19 is 3 marks)

DO NOT WRITE IN THIS AREA

DO NOT WRITE IN THIS AREA

DO NOT WRITE IN THIS AREA



20  $P = \frac{t - w}{y}$

$t = 9.7$  correct to 1 decimal place

$w = 5.9$  correct to 1 decimal place

$y = 3$  correct to 1 significant figure

Calculate the upper bound for the value of  $P$ .  
Show your working clearly.

Eney. Ahmed Sherif

#


$$9.65 \leq t < 9.75$$

$$5.85 \leq w < 5.95$$

$$2.5 \leq y < 3.5$$

$$P_{\text{upper}} = \frac{9.75 - 5.85}{2.5} = 1.56$$

(Total for Question 20 is 3 marks)



21 Given that  $x = \frac{5}{9y+5}$  and that  $y = \frac{5}{5a-2}$

find an expression for  $x$  in terms of  $a$ .

Give your expression as a single fraction in its simplest form.

Eng. Ahmed Sherif

#

$$9y = \frac{9 \times 5}{5a-2} = \frac{45}{5a-2}$$

$$x = \frac{5}{\frac{45}{5a-2} + 5} \times \frac{5a-2}{5a-2}$$

$$x = \frac{25a-10}{45+25a-10} = \frac{5(5a-2)}{25a+35}$$

$$= \frac{\cancel{5}(5a-2)}{\cancel{5}(5a+7)}$$


$$x = \frac{5a-2}{5a+7}$$

(Total for Question 21 is 4 marks)

DO NOT WRITE IN THIS AREA

DO NOT WRITE IN THIS AREA

DO NOT WRITE IN THIS AREA



22 The diagram shows a triangular prism  $ABCDEF$  with a horizontal base  $ABEF$ .

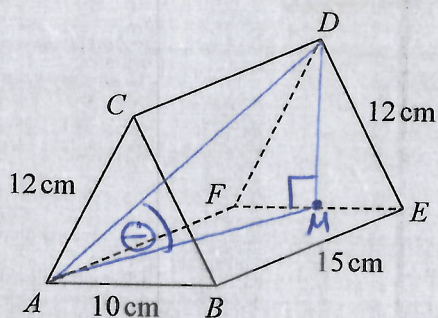


Diagram NOT accurately drawn

Eng. Ahmed Sherif

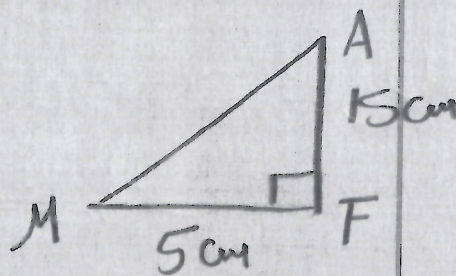
#

+201003773995

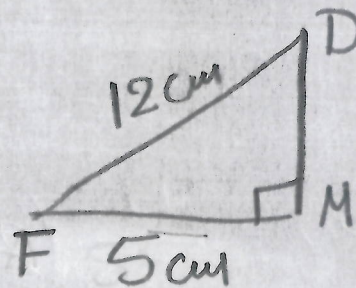
$AC = BC = FD = ED = 12 \text{ cm}$        $AB = 10 \text{ cm}$        $BE = 15 \text{ cm}$

Calculate the size of the angle between  $AD$  and the base  $ABEF$ .  
Give your answer correct to 3 significant figures.

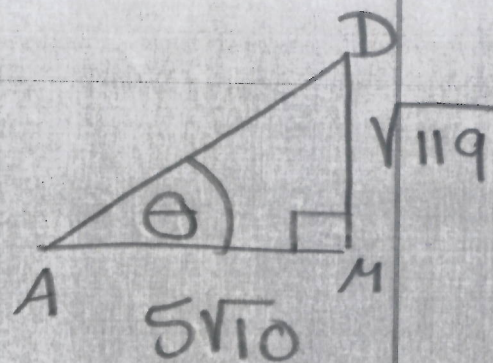
$$AM = \sqrt{15^2 + 5^2} = 5\sqrt{10} \text{ cm}$$



$$DM = \sqrt{12^2 - 5^2} = \sqrt{119} \text{ cm}$$




$$\tan \theta = \frac{\sqrt{119}}{5\sqrt{10}}$$



$\theta = 34.6^\circ$

(Total for Question 22 is 4 marks)



- 23 The sum of the first  $N$  terms of an arithmetic series,  $S$ , is 292  
 The 2nd term of  $S$  is 8.5  
 The 5th term of  $S$  is 13

Eng. Ahmed Sherif  
 #  
 +201003773995

Find the value of  $N$ .  
 Show clear algebraic working.

$$S_N = \frac{N}{2} (2a + (N-1)d) = 292$$

$$U_2 = a + d = 8.5 \rightarrow \textcircled{1}$$

$$U_5 = a + 4d = 13 \rightarrow \textcircled{2}$$

$$-3d = -4.5 \rightarrow \boxed{d = 1.5}$$

$$a + 1.5 = 8.5 \rightarrow \boxed{a = 7}$$

$$S_N = \frac{N}{2} (2 \times 7 + 1.5N - 1.5) = 292 \quad \times 2$$

$$= N (1.5N + 12.5) = 584$$

$$= 1.5N^2 + 12.5N - 584 = 0 \quad \times 2$$

$$= 3N^2 + 25N - 1168 = 0$$

$$(N - 16)(3N + 73) = 0$$

$$\boxed{N = 16}$$

$N =$

16

(Total for Question 23 is 5 marks)

DO NOT WRITE IN THIS AREA

DO NOT WRITE IN THIS AREA

DO NOT WRITE IN THIS AREA



24 The functions  $f$  and  $g$  are defined as

$$f(x) = 5x^2 - 10x + 7 \quad \text{where } x \geq 1$$

$$g(x) = 7x - 6$$

Eng. Ahmed Sherif

#

+201003773995

(a) Find  $fg(2)$

$$g(2) = 7(2) - 6 = 8$$

$$F(8) = 5(8)^2 - 10(8) + 7$$

$$= 247 \quad (2)$$

(b) Express the inverse function  $f^{-1}$  in the form  $f^{-1}(x) = \dots$

$$y = 5x^2 - 10x + 7$$

$$x = 5y^2 - 10y + 7 = 5 \left[ y^2 - 2y + \frac{7}{5} \right]$$

$$x = 5 \left[ (y-1)^2 + \frac{7}{5} - 1 \right] = 5(y-1)^2 + 2$$

$$x = 5(y-1)^2 + 2 \rightarrow \frac{x-2}{5} = (y-1)^2$$

$$y-1 = \pm \sqrt{\frac{x-2}{5}}$$

$$y = 1 \pm \sqrt{\frac{x-2}{5}}$$

$$f^{-1}(x) = \dots \quad (4)$$

$$y = 1 + \sqrt{\frac{x-2}{5}}$$

(Total for Question 24 is 6 marks)



DO NOT WRITE IN THIS AREA

DO NOT WRITE IN THIS AREA

DO NOT WRITE IN THIS AREA

important

- 25 The diagram shows two circles such that the region R, shown shaded in the diagram, is the region common to both circles.

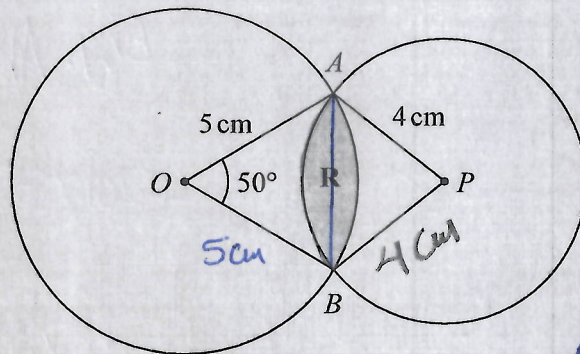


Diagram NOT accurately drawn

One of the circles has centre  $O$  and radius 5 cm.  
The other circle has centre  $P$  and radius 4 cm.  
Angle  $AOB = 50^\circ$

Calculate the area of region R.  
Give your answer correct to 3 significant figures.

Eng. Ahmed Sherif  
+201003773995

$$AB = \sqrt{(5)^2 + (5)^2 - 2(5)(5)\cos(50)}$$
$$= 4.226 \text{ cm}$$

$$\cos(P) = \frac{(4)^2 + (4)^2 - (4.226)^2}{2 \times 4 \times 4} = 0.4419$$

$$\text{Angle}(P) = 63.77^\circ$$

$$\text{Area}(R) = \text{Area of sector}(PAB) + \text{Area of sector}(OAB) - \text{Area of } \triangle PAB - \text{Area of } \triangle OAB$$





$$\text{Area of Sector (PAB)} = \frac{63.77}{360} \times \pi (4)^2 = 8.904 \text{ cm}^2$$

$$\text{Area of Sector (OAB)} = \frac{50}{360} \times \pi (5)^2 = 10.908 \text{ cm}^2$$

$$\text{Area of } \Delta PAB = \frac{1}{2} \times 4 \times 4 \times \sin 63.77 = 7.176 \text{ cm}^2$$

$$\text{Area of } \Delta OAB = \frac{1}{2} \times 5 \times 5 \times \sin 50 = 9.576 \text{ cm}^2$$


..... cm<sup>2</sup>

(Total for Question 25 is 6 marks)

$$\text{Area (R)} = 10.908 + 8.904 - 7.176 - 9.576 = 3.06 \text{ cm}^2$$

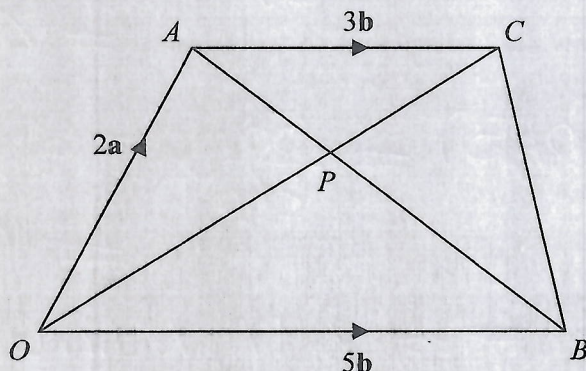
Eng. Ahmed Sherif  
#  
+201003773995

Turn over for Question 26



DO NOT WRITE IN THIS AREA

26  $OACB$  is a trapezium.

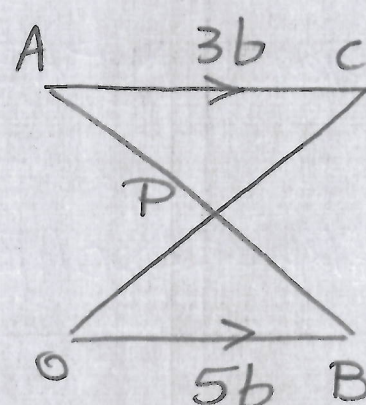


$$\vec{OA} = 2\mathbf{a} \quad \vec{OB} = 5\mathbf{b} \quad \vec{AC} = 3\mathbf{b}$$

The diagonals,  $OC$  and  $AB$ , of the trapezium intersect at the point  $P$ .

Find and simplify an expression, in terms of  $\mathbf{a}$  and  $\mathbf{b}$ , for  $\vec{OP}$ .  
Show your working clearly.

By using similarity  $\rightarrow \frac{3b}{5b} = \frac{AP}{PB}$



$$AP : PB : AB \\ 3 : 5 : 8$$

$$\vec{AB} = \vec{AO} + \vec{OB} = -2\mathbf{a} + 5\mathbf{b}$$

$$\vec{AP} = \frac{3}{8} (\vec{AB}) = \frac{-3\mathbf{a} + 15\mathbf{b}}{8}$$

$$\vec{OP} = \vec{OA} + \vec{AP}$$

$$= 2\mathbf{a} - \frac{3\mathbf{a}}{8} + \frac{15\mathbf{b}}{8}$$

$$\vec{OP} = \frac{5}{4}\mathbf{a} + \frac{15}{8}\mathbf{b} = \frac{5}{4} \left( \mathbf{a} + \frac{3}{2}\mathbf{b} \right)$$

Eng. Ahmed Sherif

#  
+201003773995

Diagram NOT accurately drawn

DO NOT WRITE IN THIS AREA

DO NOT WRITE IN THIS AREA

DO NOT WRITE IN THIS AREA

