

Write your name here

Surname	Other names
---------	-------------

Centre Number

--	--	--	--	--

Candidate Number

--	--	--	--

**Edexcel GCE**

**Physics**  
**Advanced Subsidiary**  
**Unit 1: Physics on the Go**

Thursday 21 May 2009 – Afternoon Time: 1 hour 20 minutes	Paper Reference <b>6PH01/01</b>
---	------------------------------------

You do not need any other materials.

Total Marks
-------------

### Instructions

- Use **black** ink or ball-point pen.
- **Fill in the boxes** at the top of this page with your name, centre number and candidate number.
- Answer **all** questions.
- Answer the questions in the spaces provided  
– *there may be more space than you need.*

### Information

- The total mark for this paper is 80.
- The marks for **each** question are shown in brackets  
– *use this as a guide as to how much time to spend on each question.*
- Questions labelled with an **asterisk** (\*) are ones where the quality of your written communication will be assessed  
– *you should take particular care with your spelling, punctuation and grammar, as well as the clarity of expression, on these questions.*
- The list of data, formulae and relationships is printed at the end of this booklet.
- Candidates may use a scientific calculator.

### Advice

- Read each question carefully before you start to answer it.
- Keep an eye on the time.
- Try to answer every question.
- Check your answers if you have time at the end.

Turn over ►

N34505A

©2009 Edexcel Limited.  
1/1/1/1/1/1



edexcel   
advancing learning, changing lives

**SECTION A**

**Answer ALL questions.**

**For questions 1–10, in Section A, select one answer from A to D and put a cross in the box ☒.  
If you change your mind, put a line through the box ☒ and then mark your new answer  
with a cross ☒.**

**1** Which set of quantities is all scalar?

- A** acceleration, displacement, velocity
- B** energy, mass, power
- C** extension, force, gravitational potential energy
- D** weight, kinetic energy, work

**(Total for Question 1 = 1 mark)**

**2** A material is described as ‘not easy to scratch or indent’.

The material is best described as

- A** hard
- B** plastic
- C** stiff
- D** tough

**(Total for Question 2 = 1 mark)**

**3** A force of 24 N and a force of 15 N act at right angles to each other.

The size of their resultant force is

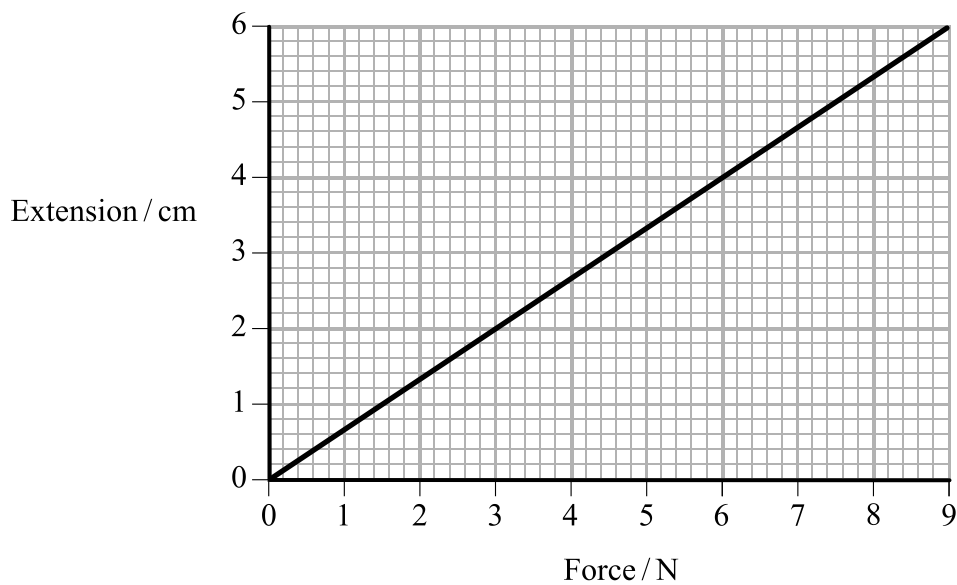
- A** 15.8 N
- B** 24.3 N
- C** 28.3 N
- D** 39.0 N

**(Total for Question 3 = 1 mark)**



Use the following graph to answer Questions 4 and 5.

The graph shows how extension varies with applied force for a spring.



4 The stiffness of the spring in  $\text{Nm}^{-1}$  is

- A 1.5
- B 54
- C 67
- D 150

(Total for Question 4 = 1 mark)

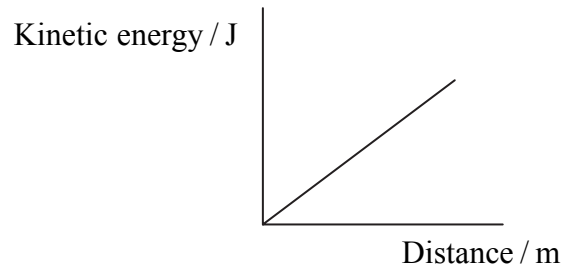
5 The energy stored in the spring when it is extended by 6.0 cm is

- A 0.27 J
- B 0.54 J
- C 54 J
- D 108 J

(Total for Question 5 = 1 mark)



- 6 The graph shows how kinetic energy varies with distance for a train accelerating from a station.



The quantity represented by the gradient of the graph is

- A acceleration
- B force
- C power
- D velocity

(Total for Question 6 = 1 mark)

- 7 A car of known mass has a constant acceleration. The resultant force acting on the car can be found by applying

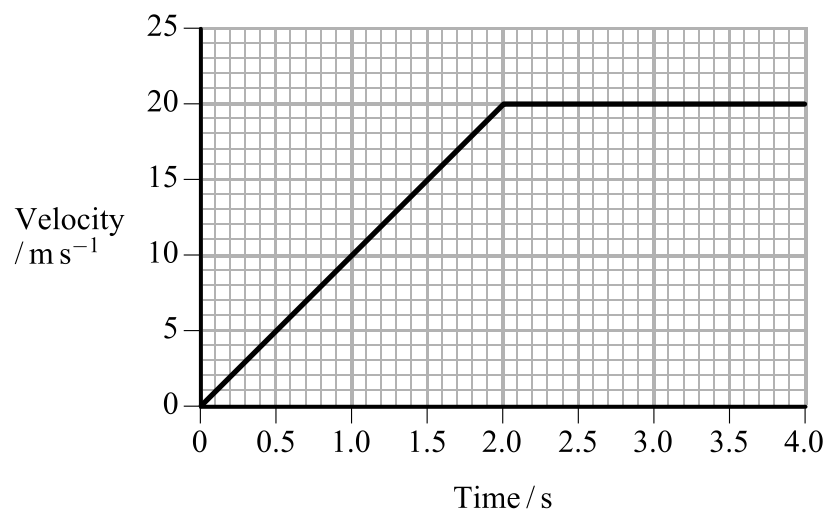
- A Newton's first law
- B Newton's second law
- C Newton's third law
- D Stokes's law

(Total for Question 7 = 1 mark)



Use the following graph to answer Questions 8 and 9.

8 The graph shows how velocity varies with time for an object.



The total distance travelled by the object in 4 s is

- A 20 m
- B 40 m
- C 60 m
- D 80 m

(Total for Question 8 = 1 mark)

9 The acceleration at 3 s is

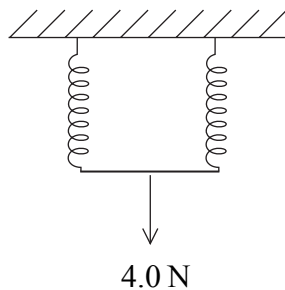
- A 10 m s<sup>-2</sup>
- B 7 m s<sup>-2</sup>
- C 5 m s<sup>-2</sup>
- D 0 m s<sup>-2</sup>

(Total for Question 9 = 1 mark)



**10** A spring extends by 10 cm when a force of 8.0 N is applied. The limit of proportionality is not exceeded.

Two of these springs are arranged side by side and a force of 4.0 N is applied.



The extension for this arrangement of springs is

- A 2.5 cm
- B 5.0 cm
- C 10 cm
- D 20 cm

(Total for Question 10 = 1 mark)

**TOTAL FOR SECTION A = 10 MARKS**



**SECTION B**

**Answer ALL questions in the spaces provided.**

**\*11** (a) Explain the difference between scalar and vector quantities.

(1)

.....

.....

.....

(b) When asked to run one complete lap around a track, a student says, "However fast I run, my average velocity for the lap will be zero".

Comment on his statement.

(3)

.....

.....

.....

.....

.....

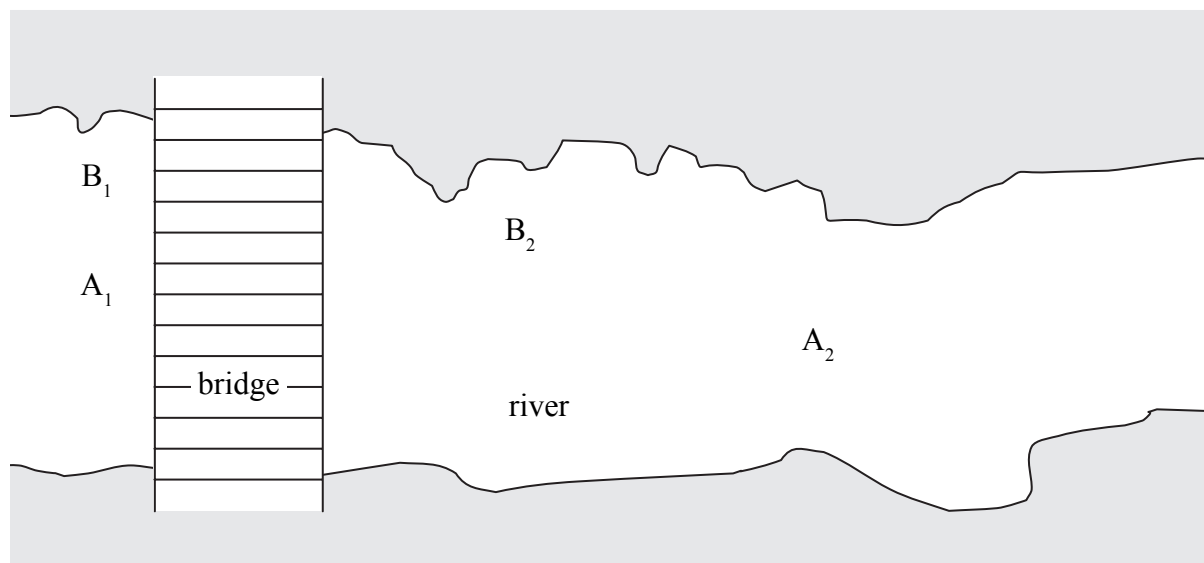
.....

.....

**(Total for Question 11 = 4 marks)**



12 In the game of Poohsticks, sticks are dropped into a river from one side of a bridge to see which reaches the other side first.



A stick is dropped into the centre of the river at  $A_1$  and moves at a steady speed to  $A_2$ , winning the game.

Another stick is dropped into the river near its edge at  $B_1$ , and ends up swirling around at  $B_2$ .

(a) Add to the diagram to show the water flow at  $A_2$  and at  $B_2$ . (2)

(b) Name and describe the type of water flow at  $A_2$  and at  $B_2$ . (4)

$A_2$  .....

.....

$B_2$  .....

.....

**(Total for Question 12 = 6 marks)**





**13 (a)** Explain the meanings of the terms brittle and ductile.  
Sketch stress-strain graphs and use them to illustrate your answer.

(4)

Brittle .....

.....  
.....  
.....  
.....  
.....  
.....  
.....

Ductile .....

.....  
.....  
.....  
.....  
.....  
.....  
.....

(b) Give an example of a ductile material and a situation where its ductile behaviour is desirable.

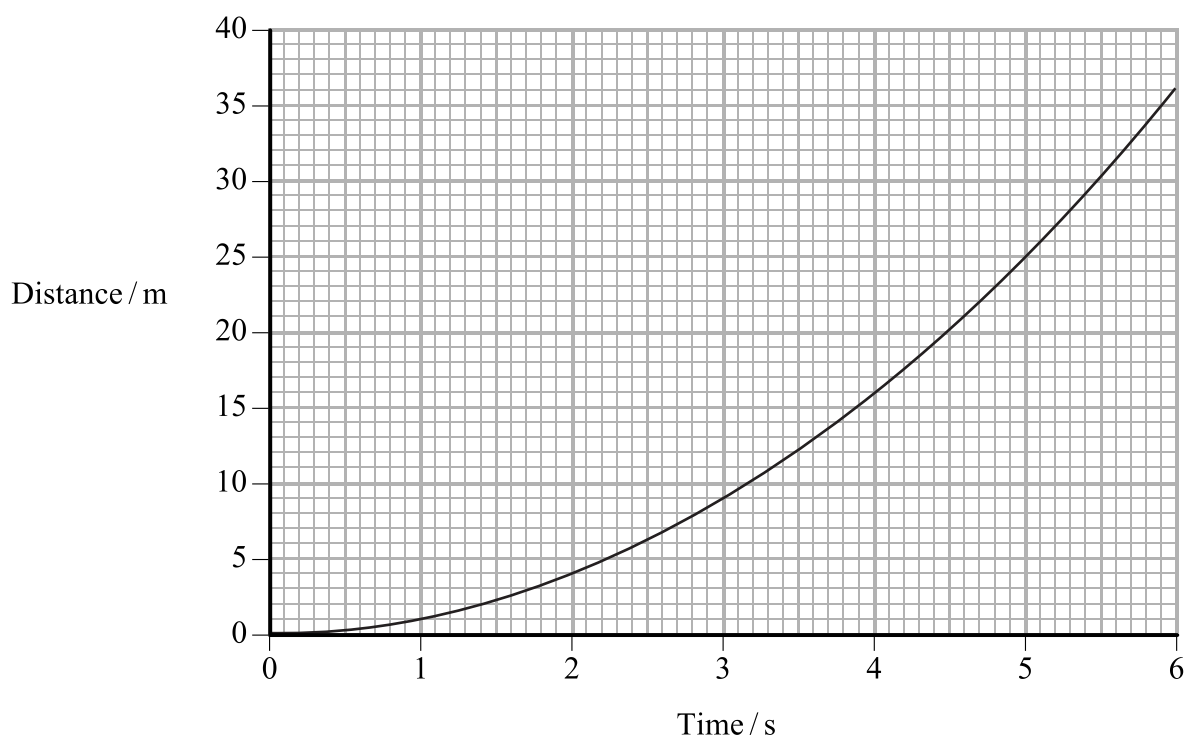
(2)

.....  
.....

**(Total for Question 13 = 6 marks)**



14 The graph shows how displacement varies with time for an object which starts from rest with constant acceleration.



(a) Use the distance-time graph to determine the speed of the object at a time of 4.0 s.

(3)

.....

.....

.....

Speed = .....

(b) Calculate the acceleration.

(2)

.....


.....

Acceleration = .....

**(Total for Question 14 = 5 marks)**



15 A student is asked to provide an explanation of why a bottle on a table remains stationary.



(a) Complete a free-body force diagram for the bottle.

(2)



(b) The student writes the following incorrect explanation.



*The force of gravity pulls the bottle down.*

*The bottle pushes down on the table, so by Newton's first law, the table pushes up with an equal and opposite force.*

*According to Newton's third law, if the forces are balanced, nothing can move.*

The student's explanation contains errors.

Rewrite the student's explanation correctly.

(3)

.....

.....

.....

.....

.....

.....

.....

.....

**(Total for Question 15 = 5 marks)**



16 In 2008 a new energy scheme opened on the Scottish island of Eigg. The scheme uses solar, hydroelectric and wind energy. There are also stand-by diesel generators.

(a) In a feasibility study, the following information was collected about one possible hydroelectric site:

mean rate of water flow into turbine =  $0.13 \text{ m}^3 \text{ s}^{-1}$   
change in height of water = 30 m.

(i) Show that the power available to the turbine is about 40 kW.

density of water =  $1000 \text{ kg m}^{-3}$

(3)

.....

.....

.....

.....

(ii) The study suggests a typical output for the turbine might be only 6 kW. Suggest a reason for this inefficiency.

(1)

.....

.....



(b) Publicity for the scheme states:

“The whole project involves one 100 kW hydroelectric system, two smaller 6 kW hydroelectric systems, a 24 kW wind farm and a 10 kW solar energy system. There are also two 80 kW diesel generators on stand-by.”

(i) Calculate the maximum energy output from the solar energy system for a period of six hours.

(2)

.....  
.....

Maximum energy output = .....

(ii) Discuss the suitability of the output of the stand-by diesel generators.

(2)

.....  
.....  
.....

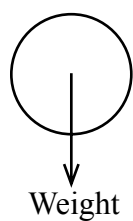
**(Total for Question 16 = 8 marks)**



17 A science centre houses a display with tall, transparent tubes of different liquids. Visitors can pump air into the bottom of the tubes to create bubbles that rise to the top at different steady speeds.

- (a) (i) Add labelled arrows to the diagram to show the other two forces acting on a bubble as it rises through a liquid.

(2)



- (ii) With reference to the forces on the bubble, explain why the bubble initially accelerates and then reaches a steady upwards speed.

(4)

.....

.....

.....

.....

.....

.....

- (iii) Write an expression which relates these forces for a bubble moving at a steady upwards speed.

(1)

.....

.....



(b) If the weight of the air in the bubble is ignored, the steady upwards speed is given by

$$v = \frac{2\rho r^2 g}{9\eta}$$

Where  $\rho$  is the density of liquid,  $r$  is the radius of the sphere and  $\eta$  is the coefficient of viscosity of the liquid.

(i) Explain why it is reasonable to ignore the weight of the air.

(2)

.....

.....

.....

(ii) Explain what happens to the speeds of the observed bubbles if the temperature of the liquid increases.

(2)

.....

.....

.....

(iii) It is possible to create a small bubble followed by a larger bubble.

Use the expression to explain why the larger bubble catches up with the smaller one.

(1)

.....

.....

.....

**(Total for Question 17 = 12 marks)**





18 Champagne bottles are often opened by ‘firing’ the cork out of the bottle. The world record for the horizontal distance travelled by a fired cork is 53 m.



The high pressure inside the bottle produces an average force of 150 N on the cork as it leaves the bottle. This force acts on the cork over a distance of  $2.5 \times 10^{-2}$  m.

(a) Show that the work done on the cork is about 4 J.

(2)

.....

.....

.....

(b) Calculate the maximum speed at which the cork could leave the bottle.

mass of cork =  $7.5 \times 10^{-3}$  kg

(2)

.....

.....

.....

Speed = .....



(c) The cork is fired from ground level at an angle of  $40^\circ$  to the horizontal with a speed of  $32 \text{ m s}^{-1}$ .

(i) Show that the vertical component of the velocity is about  $20 \text{ m s}^{-1}$ . (1)

.....  
.....

(ii) Calculate the horizontal distance travelled by the cork through the air. (5)

.....  
.....  
.....  
.....  
.....  
.....  
.....  
.....

Distance = .....


(d) Suggest an explanation for the difference between your calculated value and the world record distance. (2)

.....  
.....  
.....

**(Total for Question 18 = 12 marks)**

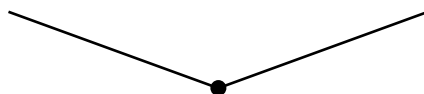


19 A washing line has a negligible mass and is initially horizontal. A student investigates the effect of hanging masses from the midpoint of the washing line.



(a) Add to the diagram to show the forces acting at the midpoint of the line when a mass is hung from its midpoint.

(2)



(b) A mass of 1.10 kg is hung from the midpoint of the line.

(i) Show that the downward vertical force on the line is about 11 N.

(1)

.....

.....

.....

(ii) This force pulls the midpoint down a distance of 48.5 cm.

Show that the line is at an angle of about  $84^\circ$  to the vertical.

length of washing line when horizontal = 9.600 m

(2)

.....

.....

.....



(iii) Show that the tension in the line is less than 60 N.

(2)

.....

.....

.....

(iv) The washing line stretches so that the total length of the line is now 9.847 m.

Calculate the strain for the line.

(2)

.....

.....

.....

Strain = .....

(c) Calculate the value of the Young modulus for the line material.

cross-sectional area of the line =  $6.6 \times 10^{-6} \text{ m}^2$

(3)

.....

.....

.....

Young modulus = .....

**(Total for Question 19 = 12 marks)**

---

**TOTAL FOR SECTION B = 70 MARKS**

**TOTAL FOR PAPER = 80 MARKS**



### List of data, formulae and relationships

Acceleration of free fall	$g = 9.81 \text{ m s}^{-2}$	(close to Earth's surface)
Electron charge	$e = -1.60 \times 10^{-19} \text{ C}$	
Electron mass	$m_e = 9.11 \times 10^{-31} \text{ kg}$	
Electronvolt	$1 \text{ eV} = 1.60 \times 10^{-19} \text{ J}$	
Gravitational field strength	$g = 9.81 \text{ N kg}^{-1}$	(close to Earth's surface)
Planck constant	$h = 6.63 \times 10^{-34} \text{ J s}$	
Speed of light in a vacuum	$c = 3.00 \times 10^8 \text{ m s}^{-1}$	

#### Unit 1

##### Mechanics

Kinematic equations of motion	$v = u + at$
	$s = ut + \frac{1}{2}at^2$
	$v^2 = u^2 + 2as$
Forces	$\Sigma F = ma$
	$g = F/m$
	$W = mg$
Work and energy	$\Delta W = F\Delta s$
	$E_k = \frac{1}{2}mv^2$
	$\Delta E_{\text{grav}} = mg\Delta h$

##### Materials

Stokes' law	$F = 6\pi\eta r v$
Hooke's law	$F = k\Delta x$
Density	$\rho = m/V$
Pressure	$p = F/A$
Young's modulus	$E = \sigma/\epsilon$ where
	Stress $\sigma = F/A$
	Strain $\epsilon = \Delta x/x$
Elastic strain energy	$E_{\text{el}} = \frac{1}{2}F\Delta x$



**BLANK PAGE**



**BLANK PAGE**



**BLANK PAGE**

