

Please check the examination details below before entering your candidate information

Candidate surname

Other names

Pearson Edexcel
International
Advanced Level

Centre Number

Candidate Number

| | | | | |
|--|--|--|--|--|
| | | | | |
|--|--|--|--|--|

| | | | |
|--|--|--|--|
| | | | |
|--|--|--|--|

Time 1 hour 45 minutes

Paper
reference

WCH14/01

Chemistry

International Advanced Level

UNIT 4: Rates, Equilibria and Further Organic Chemistry

You must have:

Scientific calculator, Data Booklet, ruler

Total Marks

Instructions

- Use **black** ink or ball-point pen.
- **Fill in the boxes** at the top of this page with your name, centre number and candidate number.
- Answer **all** questions.
- Answer the questions in the spaces provided – *there may be more space than you need.*
- Show all your working in calculations and include units where appropriate.

Information

- The total mark for this paper is 90.
- The marks for **each** question are shown in brackets – *use this as a guide as to how much time to spend on each question.*
- In the question marked with an **asterisk** (*), marks will be awarded for your ability to structure your answer logically, showing how the points that you make are related or follow on from each other where appropriate.
- A Periodic Table is printed on the back cover of this paper.

Advice

- Read each question carefully before you start to answer it.
- Try to answer every question.
- Check your answers if you have time at the end.
- Good luck with your examination.

Turn over ►

P64626A

©2021 Pearson Education Ltd.

1/1/1/1/1/1



Pearson

SECTION A

Answer ALL the questions in this section.

You should aim to spend no more than 20 minutes on this section.

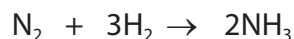
For each question, select one answer from A to D and put a cross in the box .
If you change your mind, put a line through the box and then mark
your new answer with a cross .

1 Which of these gases would have the greatest standard molar entropy?

- A NH₃
 B H₂
 C N₂
 D SO₂

(Total for Question 1 = 1 mark)

2 What is the standard entropy change of the system, in J K⁻¹ mol⁻¹, for the reaction between nitrogen and hydrogen to form ammonia?



| | Standard molar entropy / J K ⁻¹ mol ⁻¹ |
|-----------------|--|
| H ₂ | 130.6 |
| N ₂ | 191.6 |
| NH ₃ | 192.3 |

- A -198.8
 B -129.9
 C +129.9
 D +198.8

(Total for Question 2 = 1 mark)

DO NOT WRITE IN THIS AREA

DO NOT WRITE IN THIS AREA

DO NOT WRITE IN THIS AREA



3 The enthalpy change of solution of sodium sulfate, Na_2SO_4 , may be calculated using three pieces of data. Which of these pieces of data is **not** required?

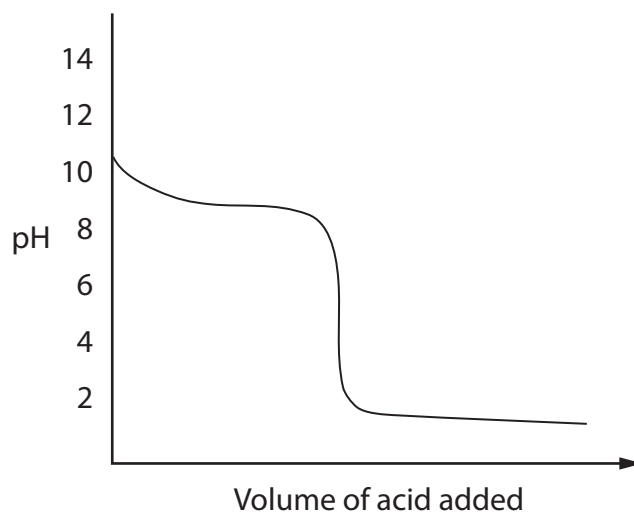
- A lattice energy of Na_2SO_4
- B enthalpy change of hydration of Na^+
- C enthalpy change of formation of Na_2SO_4
- D enthalpy change of hydration of SO_4^{2-}

(Total for Question 3 = 1 mark)

Use this space for any rough working. Anything you write in this space will gain no credit.



4 A graph of pH against volume of acid added for an acid-base titration is shown.



(a) Which acidic solution was used in the titration?

(1)

- A $0.1 \text{ mol dm}^{-3} \text{ CH}_3\text{COOH}$
- B $1.0 \text{ mol dm}^{-3} \text{ CH}_3\text{COOH}$
- C $0.1 \text{ mol dm}^{-3} \text{ HCl}$
- D $1.0 \text{ mol dm}^{-3} \text{ HCl}$

(b) Which basic solution was used in the titration?

(1)

- A NH_3
- B LiOH
- C $\text{Ba}(\text{OH})_2$
- D NaOH



(c) A student suggested five indicators that might be used in this titration:

thymol blue
methyl orange
bromophenol blue
bromocresol green
phenolphthalein

How many of these indicators would be suitable? Use your Data Booklet.

(1)

- A** 5
 B 4
 C 3
 D 2

(Total for Question 4 = 3 marks)

- 5 The halogenoalkane 2-bromo-2-methylbutane was hydrolysed with sodium hydroxide solution, NaOH(aq). Which suggestion about the mechanism of this reaction is correct?

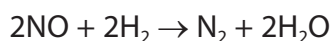
| | Type of mechanism | Number of steps in mechanism |
|-----------------------------------|-------------------|------------------------------|
| <input type="checkbox"/> A | S_N2 | one |
| <input type="checkbox"/> B | S_N2 | two |
| <input type="checkbox"/> C | S_N1 | one |
| <input type="checkbox"/> D | S_N1 | two |

(Total for Question 5 = 1 mark)

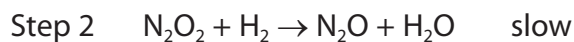
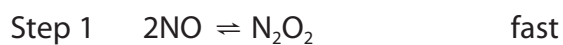
Use this space for any rough working. Anything you write in this space will gain no credit.



6 Nitrogen monoxide and hydrogen react together to form nitrogen and water.



The steps in the mechanism of the reaction are



Which statement about the reaction is correct?

- A Step 3 is the rate determining step and the overall order is 2
- B Step 3 is the rate determining step and the overall order is 4
- C Step 2 is the rate determining step and the overall order is 2
- D Step 2 is the rate determining step and the overall order is 3

(Total for Question 6 = 1 mark)

7 The Arrhenius equation can be shown as

$$\ln k = -\frac{E_a}{R} \times \frac{1}{T} + \text{constant}$$

A graph is plotted of $\ln k$ against $1/T$ for a reaction.
The activation energy, E_a , of this reaction equals

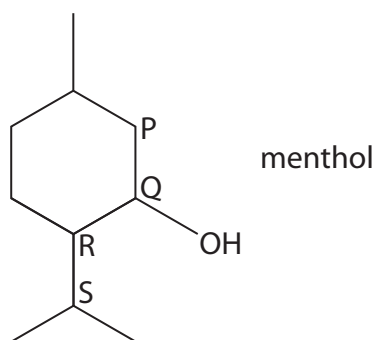
- A $-\text{gradient} \div R$
- B $+\text{gradient} \div R$
- C $-\text{gradient} \times R$
- D $+\text{gradient} \times R$

(Total for Question 7 = 1 mark)

Use this space for any rough working. Anything you write in this space will gain no credit.



- 8 The compound menthol has the structure shown.
Some of the carbon atoms are labelled P, Q, R and S.



- (a) What is the number of chiral centres in a molecule of menthol?

(1)

- A** 1
- B** 2
- C** 3
- D** 4

- (b) Which of the carbon atoms is responsible for a peak at 72 ppm in the ^{13}C NMR spectrum of menthol?

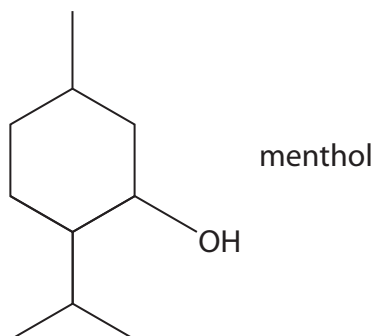
(1)

- A** P
- B** Q
- C** R
- D** S



- (c) Four groups of students warmed samples of menthol with sodium dichromate(VI) in acid. They purified the reaction mixture and carried out a series of qualitative tests on the organic product.

The findings of each group in the class are shown in the table.



| Group | Qualitative test | | |
|-------|--------------------------------|------------------------------|----------------------|
| | Add 2,4-dinitrophenylhydrazine | Warm with Fehling's solution | Add PCl ₅ |
| One | ✓ | ✗ | ✓ |
| Two | ✓ | ✗ | ✗ |
| Three | ✓ | ✓ | ✗ |
| Four | ✗ | ✗ | ✓ |

A tick (✓) shows a positive result, a cross (✗) shows a negative result.
Which group recorded the results you would expect?

(1)

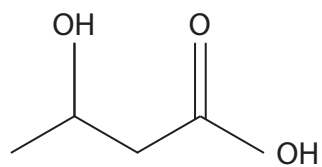
- A One
- B Two
- C Three
- D Four

(Total for Question 8 = 3 marks)

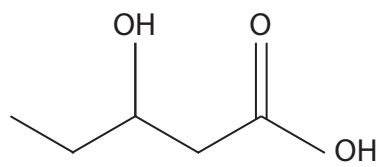
Use this space for any rough working. Anything you write in this space will gain no credit.



- 9 The substance known as PHBV is a biodegradable polymer formed from 3-hydroxybutanoic acid and 3-hydroxypentanoic acid.



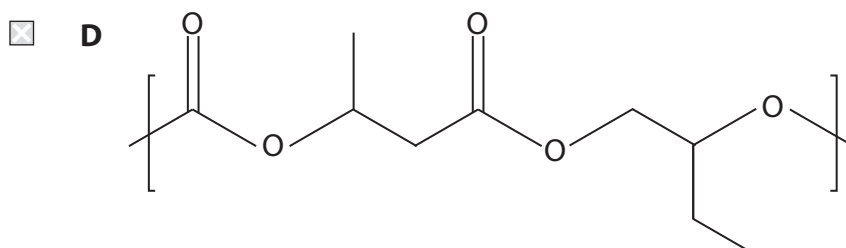
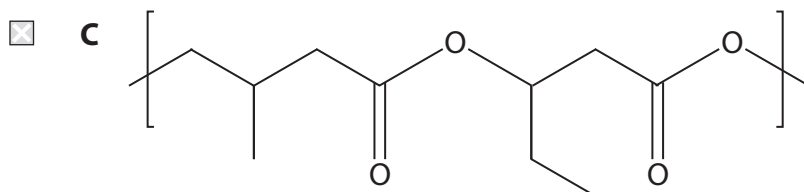
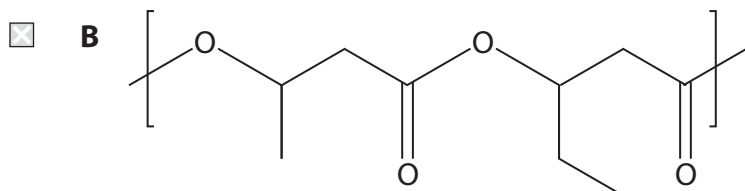
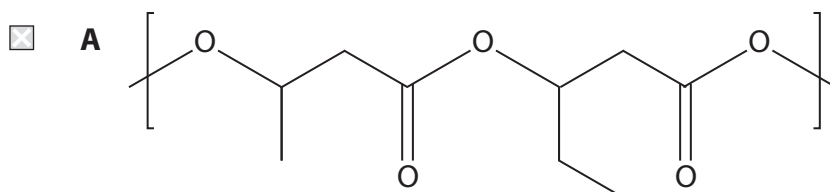
3-hydroxybutanoic acid



3-hydroxypentanoic acid

- (a) Which of these is the repeat unit of the polymer?

(1)



- (b) What reaction occurs when PHBV biodegrades to its monomers?

(1)

- A** condensation
 B hydrolysis
 C hydration
 D hydrogenation

(Total for Question 9 = 2 marks)



10 Which reagent reacts at room temperature with methylamine, CH_3NH_2 , to form the compound N-methylethanamide?

- A CH_3COCH_3
- B CH_3COOH
- C $\text{CH}_3\text{COOCH}_3$
- D CH_3COCl

(Total for Question 10 = 1 mark)

11 This question is about chromatography.

- (a) A spot caused by an amino acid has moved 42 mm from the baseline of a paper chromatogram.
The R_f value for the amino acid under these conditions is 0.62.

What is the distance moved by the solvent?

(1)

- A 680 mm
- B 68 mm
- C 42 mm
- D 26 mm

- (b) In gas chromatography, GC, which of these would be the most suitable carrier gas?

(1)

- A argon
- B hydrogen
- C methane
- D oxygen

(Total for Question 11 = 2 marks)

Use this space for any rough working. Anything you write in this space will gain no credit.

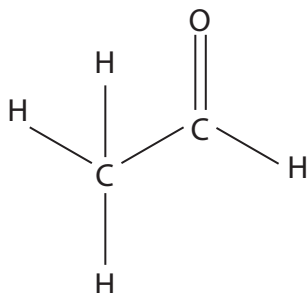


12 The high resolution mass spectrum of a compound X has a molecular ion peak at $m/z = 44.0632$. Accurate relative atomic masses are given in the table.

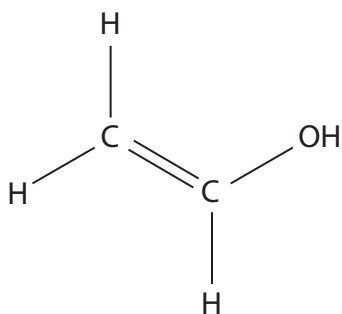
| Element | Relative atomic mass |
|----------|----------------------|
| Hydrogen | 1.0079 |
| Carbon | 12.0000 |
| Oxygen | 15.9949 |

Which of these compounds, with a relative molecular mass of 44, gives rise to this peak?

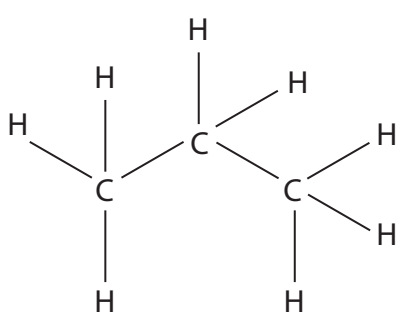
A



B



C

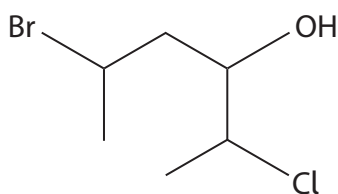


D $O=C=O$

(Total for Question 12 = 1 mark)



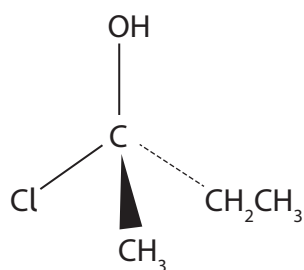
13 How many optical isomers does this molecule have?



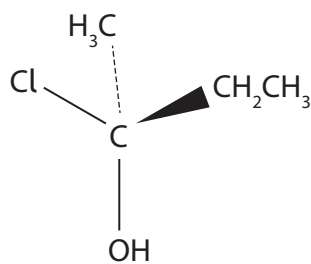
- A 2
- B 3
- C 6
- D 8

(Total for Question 13 = 1 mark)

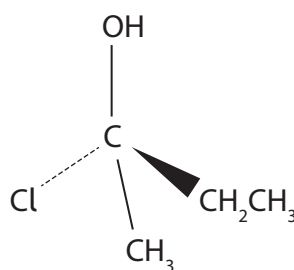
14 Which of these structures is **not** identical to the others?



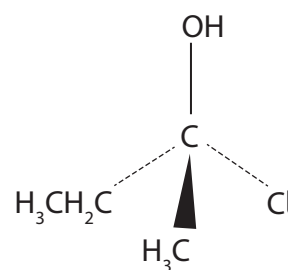
Structure A



Structure B



Structure C



Structure D

- A Structure A
- B Structure B
- C Structure C
- D Structure D

(Total for Question 14 = 1 mark)

TOTAL FOR SECTION A = 20 MARKS



SECTION B

Answer ALL the questions. Write your answers in the spaces provided.

15 The standard enthalpy change of solution for ammonium nitrate, NH_4NO_3 , is $+25.7 \text{ kJ mol}^{-1}$.

- (a) Calculate the value for the standard entropy change in the surroundings, $\Delta S_{\text{surroundings}}^{\ominus}$, when ammonium nitrate dissolves in water at 298 K. Include a sign and units with your answer.

(2)

- (b) Explain what can be deduced from your answer in (a) about the sign and the value of the standard entropy change in the system, $\Delta S_{\text{system}}^{\ominus}$, when NH_4NO_3 dissolves.

(3)

.....

.....

.....

.....

.....

.....

.....

.....

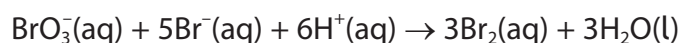
.....

(Total for Question 15 = 5 marks)

DO NOT WRITE IN THIS AREA



- 16 A student investigated the kinetics of the reaction between bromate(V) ions and bromide ions in acidic conditions.

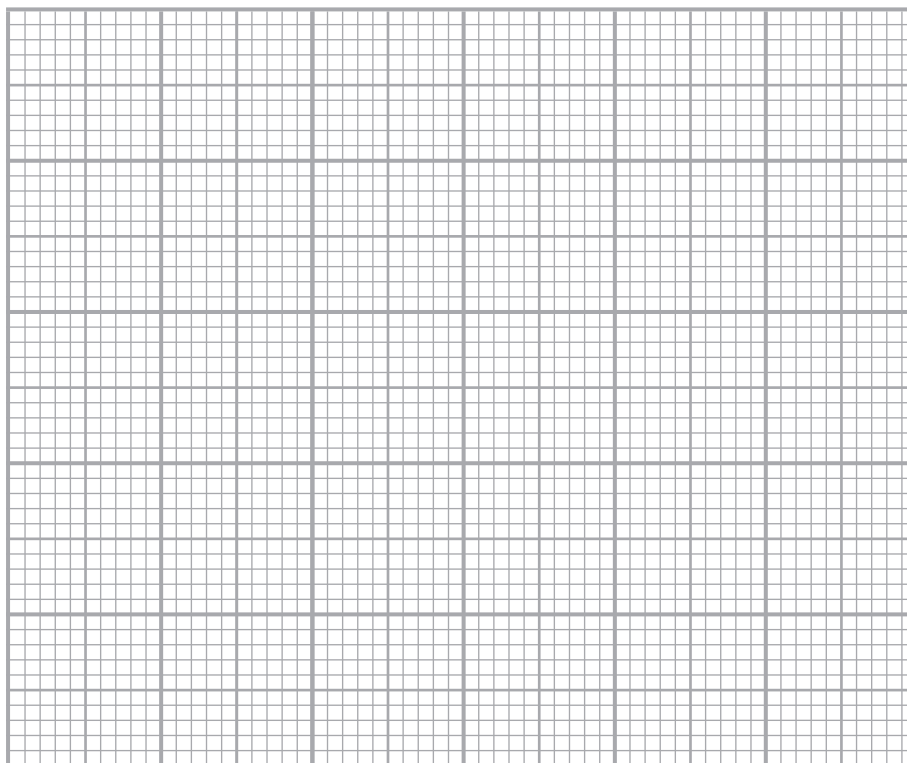


- (a) In the first experiment, the student measured the initial rate of the reaction at five different concentrations of bromate(V) ions, BrO_3^- . In each case, the initial concentrations of bromide ions and hydrogen ions were constant and in large excess. The results obtained are shown.

| Initial concentration of bromate(V) ions / mol dm^{-3} | Initial rate of reaction / $\text{mol dm}^{-3} \text{ s}^{-1}$ |
|---|--|
| 0.030 | 4.17×10^{-7} |
| 0.060 | 8.34×10^{-7} |
| 0.090 | 1.25×10^{-6} |
| 0.120 | 1.67×10^{-6} |
| 0.150 | 2.09×10^{-6} |

- (i) Use the results to plot a suitable graph that can be used to show that the reaction is first order with respect to bromate(V) ions.

(3)



(ii) State how your graph shows that the reaction is first order with respect to bromate(V) ions.

(1)

(b) In the second experiment, the student determined the initial rates of the same reaction starting with different concentrations of the reactants.

| Run | [BrO ₃ ⁻] / mol dm ⁻³ | [Br ⁻] / mol dm ⁻³ | [H ⁺] / mol dm ⁻³ | Initial rate of reaction / mol dm ⁻³ s ⁻¹ |
|-----|--|--|---|--|
| 1 | 0.062 | 0.21 | 0.40 | 1.52 × 10 ⁻⁵ |
| 2 | 0.31 | 0.21 | 0.20 | 1.90 × 10 ⁻⁵ |
| 3 | 0.062 | 0.63 | 0.40 | 4.56 × 10 ⁻⁵ |

(i) Use these results and your answer to (a) to deduce the orders with respect to Br⁻ ions and H⁺ ions.

(2)

Br⁻ ions.....

H⁺ ions.....

(ii) Write the rate equation for the reaction.

(1)

(iii) Use the results for Run 1 and your rate equation from (b)(ii) to calculate the value for the rate constant, *k*. Include units in your answer.

(3)

DO NOT WRITE IN THIS AREA

DO NOT WRITE IN THIS AREA

DO NOT WRITE IN THIS AREA



DO NOT WRITE IN THIS AREA

DO NOT WRITE IN THIS AREA

DO NOT WRITE IN THIS AREA

BLANK PAGE



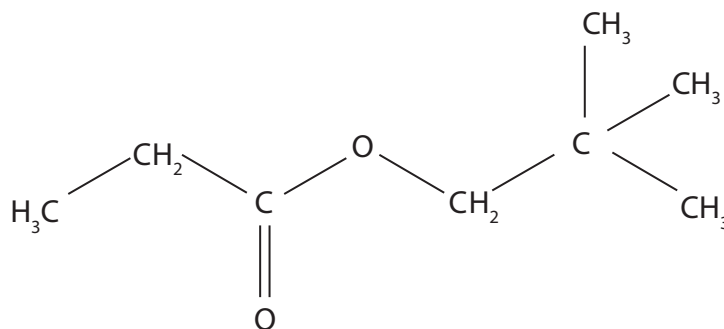
P 6 4 6 2 6 A 0 1 7 3 2

17 This question is about an ester, **Y**, with the molecular formula $C_8H_{16}O_2$.

- (a) **Y** contains 66.7% carbon, 11.1% hydrogen and 22.2% oxygen by mass. Show that these data are consistent with its molecular formula.

(2)

- (b) The structure of compound **Y** is



- (i) Give the IUPAC name of **Y**.

(2)

- (ii) Draw the structures of two organic compounds that would react together to form **Y**.

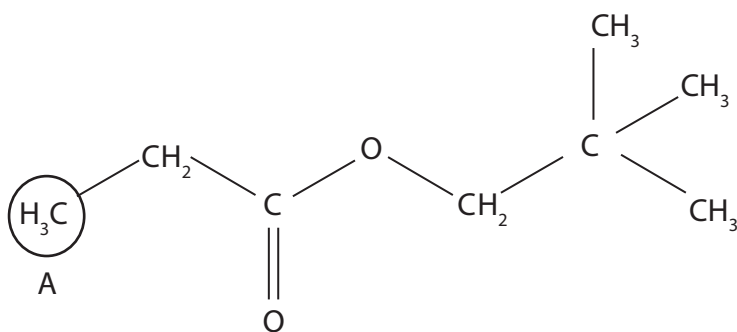
(1)



(c) The high resolution proton NMR spectrum of compound **Y** was obtained.

(i) Label the three remaining hydrogen environments B, C and D on the structure.

(1)



(ii) Complete the table.

(3)

| Hydrogen environment | Splitting pattern of peak | Relative peak area |
|----------------------|---------------------------|--------------------|
| A | triplet | 3 |
| B | | |
| C | | |
| D | | |

(Total for Question 17 = 9 marks)



DO NOT WRITE IN THIS AREA

DO NOT WRITE IN THIS AREA

DO NOT WRITE IN THIS AREA

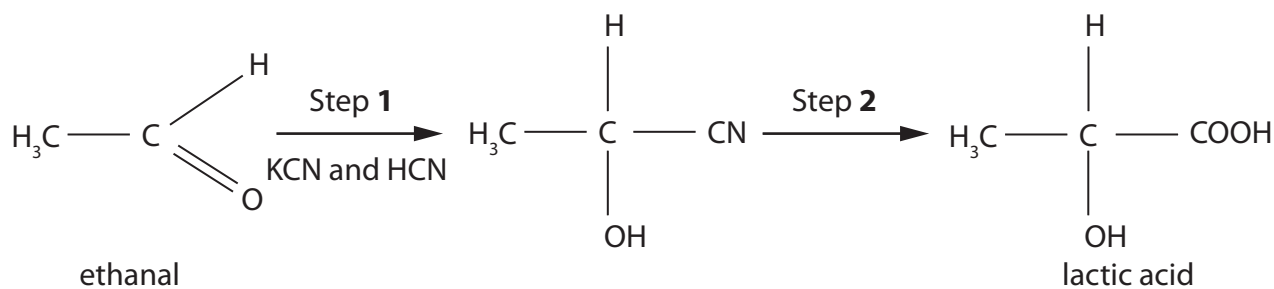
Handwriting practice area with 24 horizontal dotted lines.

(Total for Question 18 = 6 marks)



P 6 4 6 2 6 A 0 2 1 3 2

19 The compound lactic acid can be synthesised from ethanal in two steps.



- (a) (i) Give the mechanism for Step 1. Include curly arrows, and any relevant lone pairs and dipoles.

(4)

- (ii) A student predicted that the product of Step 1 would rotate the plane of plane-polarised light.

Comment on this prediction.

(3)

.....

.....

.....

.....

.....

.....

.....

.....

.....

.....

DO NOT WRITE IN THIS AREA

DO NOT WRITE IN THIS AREA

DO NOT WRITE IN THIS AREA



(iii) Complete the table that summarises information about Step 2.
State symbols are not required for the equation.

(4)

| Conversion of $\text{CH}_3\text{CH}(\text{OH})\text{CN}$ to lactic acid | |
|---|--|
| Reaction type | |
| Reagent | |
| Conditions | |
| Equation | |

(b) Sodium hydrogencarbonate, NaHCO_3 , has been used by some athletes to help prevent lactic acid causing muscle pain during exercise.

Write an equation for the reaction between sodium hydrogencarbonate and lactic acid.

(1)

DO NOT WRITE IN THIS AREA

DO NOT WRITE IN THIS AREA

DO NOT WRITE IN THIS AREA



P 6 4 6 2 6 A 0 2 3 3 2

- (c) Sodium hydrogencarbonate is part of a buffer in the body that controls the pH of blood. Two of the equilibria involved in this process are shown.



- (i) Use the equilibria to explain how the buffer keeps the pH of blood nearly constant when a small increase in the concentration of hydrogen ions occurs.

(3)

.....

.....

.....

.....

.....

.....

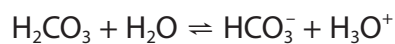
.....

.....

.....

.....

- (ii) The pH of a blood sample was found to be 7.41.
Calculate the ratio of the concentration of HCO_3^- to H_2CO_3 in the blood sample.



$$K_a = 4.50 \times 10^{-7} \text{ mol dm}^{-3}$$

(3)

(Total for Question 19 = 18 marks)

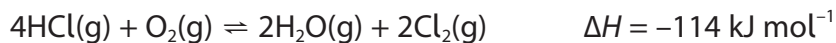
TOTAL FOR SECTION B = 51 MARKS



SECTION C

Answer ALL the questions. Write your answers in the spaces provided.

20 The reversible reaction between hydrogen chloride and oxygen produces water **vapour** and chlorine.



(a) Explain what effect, if any, each of the following changes has on the yield of chlorine at equilibrium **and** on the equilibrium constant, K_p .

(i) An increase in the total pressure

(3)

.....

.....

.....

.....

.....

.....

.....

.....

.....

.....

(ii) An increase in the temperature

(2)

.....

.....

.....

.....

.....

.....

.....

.....

.....

.....

(iii) The use of a catalyst

(2)

.....

.....

.....

.....

.....

.....

.....

.....

.....

.....

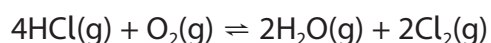
DO NOT WRITE IN THIS AREA

DO NOT WRITE IN THIS AREA

DO NOT WRITE IN THIS AREA



- (b) 0.850 mol of hydrogen chloride was mixed with 0.600 mol of oxygen and allowed to reach equilibrium in a closed flask.
At equilibrium the total pressure was 1.50 atm and there was 0.250 mol of chlorine in the flask.



- (i) Complete the table.

(3)

| Substance | Initial amount / mol | Equilibrium amount / mol | Mole fraction at equilibrium |
|------------------------------|----------------------|--------------------------|------------------------------|
| HCl | 0.850 | | |
| O ₂ | 0.600 | | |
| H ₂ O | 0 | | |
| Cl ₂ | 0 | 0.250 | 0.189 |
| Total moles at equilibrium = | | | |

- (ii) Write the expression for the equilibrium constant, K_p .

(1)



(iii) Use your answers to (b)(i) and (b)(ii) to calculate the value for K_p . Give your answer to an appropriate number of significant figures, and include units.

(3)

(iv) Use your answer to (b)(iii) to calculate a value for the total entropy change of the reaction, ΔS_{total} .

(2)

DO NOT WRITE IN THIS AREA

DO NOT WRITE IN THIS AREA

DO NOT WRITE IN THIS AREA

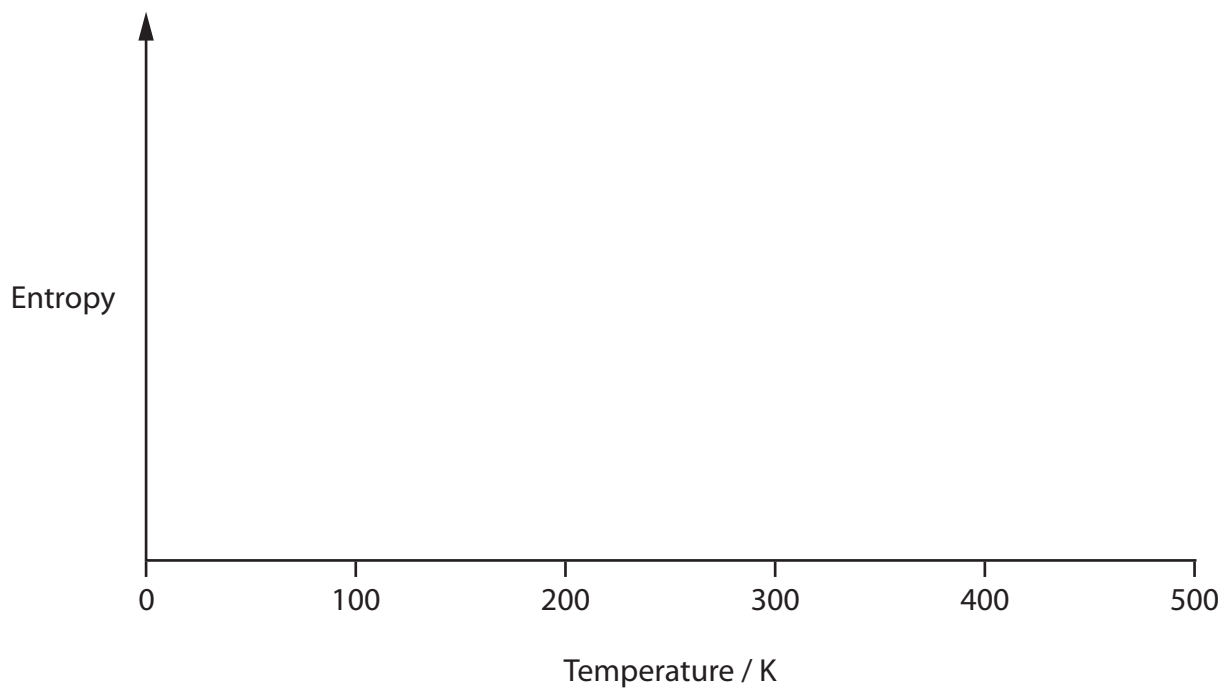


P 6 4 6 2 6 A 0 2 7 3 2

- (c) Draw a sketch of entropy against temperature for water to illustrate the entropy changes as temperature increases, including when water changes state.

A scale is not required for the vertical axis

(3)



(Total for Question 20 = 19 marks)

TOTAL FOR SECTION C = 19 MARKS
TOTAL FOR PAPER = 90 MARKS



DO NOT WRITE IN THIS AREA

DO NOT WRITE IN THIS AREA

DO NOT WRITE IN THIS AREA

BLANK PAGE



DO NOT WRITE IN THIS AREA

DO NOT WRITE IN THIS AREA

DO NOT WRITE IN THIS AREA

BLANK PAGE



DO NOT WRITE IN THIS AREA

DO NOT WRITE IN THIS AREA

DO NOT WRITE IN THIS AREA

BLANK PAGE



P 6 4 6 2 6 A 0 3 1 3 2

The Periodic Table of Elements

1 2 3 4 5 6 7 0 (8) (18)

| | | | |
|-----|----------|----------|---|
| 1.0 | H | hydrogen | 1 |
|-----|----------|----------|---|

Key

| |
|------------------------|
| relative atomic mass |
| atomic symbol |
| name |
| atomic (proton) number |

(1) (2)

| | | | |
|------|-----------|-----------|----|
| 6.9 | Li | lithium | 3 |
| 9.0 | Be | beryllium | 4 |
| 23.0 | Na | sodium | 11 |
| 24.3 | Mg | magnesium | 12 |

(13)

| | | | |
|------|-----------|-----------|----|
| 10.8 | B | boron | 5 |
| 12.0 | C | carbon | 6 |
| 27.0 | Al | aluminium | 13 |
| 28.1 | Si | silicon | 14 |

(14)

| | | | |
|------|----------|----------|----|
| 12.0 | C | carbon | 6 |
| 14.0 | N | nitrogen | 7 |
| 16.0 | O | oxygen | 8 |
| 32.1 | S | sulfur | 16 |

(15)

| | | | |
|------|-----------|----------|----|
| 14.0 | N | nitrogen | 7 |
| 16.0 | O | oxygen | 8 |
| 19.0 | F | fluorine | 9 |
| 35.5 | Cl | chlorine | 17 |

(16)

| | | | |
|------|----------|----------|----|
| 12.0 | C | carbon | 6 |
| 14.0 | N | nitrogen | 7 |
| 16.0 | O | oxygen | 8 |
| 32.1 | S | sulfur | 16 |

(17)

| | | | |
|------|-----------|----------|----|
| 19.0 | F | fluorine | 9 |
| 35.5 | Cl | chlorine | 17 |
| 79.9 | Br | bromine | 35 |
| 83.8 | Kr | krypton | 36 |

(18)

| | | | |
|------|-----------|---------|----|
| 4.0 | He | helium | 2 |
| 20.2 | Ne | neon | 10 |
| 39.9 | Ar | argon | 18 |
| 83.8 | Kr | krypton | 36 |

(12)

| | | | |
|------|-----------|-----------|----|
| 65.4 | Zn | zinc | 30 |
| 63.5 | Cu | copper | 29 |
| 69.7 | Ga | gallium | 31 |
| 72.6 | Ge | germanium | 32 |

(11)

| | | | |
|-------|-----------|---------|----|
| 112.4 | Cd | cadmium | 48 |
| 107.9 | Ag | silver | 47 |
| 114.8 | In | indium | 49 |
| 118.7 | Sn | tin | 50 |

(10)

| | | | |
|-------|-----------|-----------|----|
| 58.7 | Ni | nickel | 28 |
| 58.9 | Co | cobalt | 27 |
| 106.4 | Pd | palladium | 46 |
| 197.0 | Au | gold | 79 |

(9)

| | | | |
|-------|-----------|----------|----|
| 102.9 | Rh | rhodium | 45 |
| 192.2 | Ir | iridium | 77 |
| 195.1 | Pt | platinum | 78 |
| 200.6 | Hg | mercury | 80 |

(8)

| | | | |
|-------|-----------|-----------|----|
| 55.8 | Fe | iron | 26 |
| 101.1 | Ru | ruthenium | 44 |
| 190.2 | Os | osmium | 76 |
| 204.4 | Tl | thallium | 81 |

(7)

| | | | |
|-------|-----------|------------|----|
| 54.9 | Mn | manganese | 25 |
| [98] | Tc | technetium | 43 |
| 186.2 | Re | rhenium | 75 |
| 207.2 | Pb | lead | 82 |

(6)

| | | | |
|-------|-----------|----------|----|
| 52.0 | Cr | chromium | 24 |
| 95.9 | Nb | niobium | 41 |
| 183.8 | W | tungsten | 74 |
| 209.0 | Bi | bismuth | 83 |

(5)

| | | | |
|-------|-----------|----------|----|
| 50.9 | V | vanadium | 23 |
| 92.9 | Nb | niobium | 41 |
| 180.9 | Ta | tantalum | 73 |
| 209.0 | Bi | bismuth | 83 |

(4)

| | | | |
|-------|-----------|-----------|----|
| 47.9 | Ti | titanium | 22 |
| 91.2 | Zr | zirconium | 40 |
| 178.5 | Hf | hafnium | 72 |
| 204.4 | Tl | thallium | 81 |

(3)

| | | | |
|-------|-----------|----------|----|
| 45.0 | Sc | scandium | 21 |
| 88.9 | Y | yttrium | 39 |
| 138.9 | Ba | barium | 56 |
| 209.0 | Bi | bismuth | 83 |

(1)

| | | | |
|-------|-----------|-----------|----|
| 6.9 | Li | lithium | 3 |
| 9.0 | Be | beryllium | 4 |
| 23.0 | Na | sodium | 11 |
| 24.3 | Mg | magnesium | 12 |
| 39.1 | K | potassium | 19 |
| 85.5 | Rb | rubidium | 37 |
| 132.9 | Cs | caesium | 55 |
| [223] | Fr | francium | 87 |

(13)

| | | | |
|------|-----------|-----------|----|
| 10.8 | B | boron | 5 |
| 12.0 | C | carbon | 6 |
| 27.0 | Al | aluminium | 13 |
| 28.1 | Si | silicon | 14 |

(14)

| | | | |
|------|----------|----------|----|
| 12.0 | C | carbon | 6 |
| 14.0 | N | nitrogen | 7 |
| 16.0 | O | oxygen | 8 |
| 32.1 | S | sulfur | 16 |

(15)

| | | | |
|------|-----------|----------|----|
| 14.0 | N | nitrogen | 7 |
| 16.0 | O | oxygen | 8 |
| 19.0 | F | fluorine | 9 |
| 35.5 | Cl | chlorine | 17 |

(16)

| | | | |
|------|----------|----------|----|
| 12.0 | C | carbon | 6 |
| 14.0 | N | nitrogen | 7 |
| 16.0 | O | oxygen | 8 |
| 32.1 | S | sulfur | 16 |

(17)

| | | | |
|------|-----------|----------|----|
| 19.0 | F | fluorine | 9 |
| 35.5 | Cl | chlorine | 17 |
| 79.9 | Br | bromine | 35 |
| 83.8 | Kr | krypton | 36 |

(18)

| | | | |
|------|-----------|---------|----|
| 4.0 | He | helium | 2 |
| 20.2 | Ne | neon | 10 |
| 39.9 | Ar | argon | 18 |
| 83.8 | Kr | krypton | 36 |

Elements with atomic numbers 112-116 have been reported but not fully authenticated

| | | | |
|-----|-----------|--------------|----|
| 140 | Ce | cerium | 58 |
| 141 | Pr | praseodymium | 59 |
| 144 | Nd | neodymium | 60 |
| 147 | Pm | promethium | 61 |
| 150 | Sm | samarium | 62 |
| 152 | Eu | europium | 63 |
| 157 | Gd | gadolinium | 64 |
| 159 | Tb | terbium | 65 |
| 163 | Dy | dysprosium | 66 |
| 165 | Ho | holmium | 67 |
| 167 | Er | erbium | 68 |
| 169 | Tm | thulium | 69 |
| 173 | Yb | ytterbium | 70 |
| 175 | Lu | lutetium | 71 |

* Lanthanide series

* Actinide series

| | | | |
|-------|-----------|--------------|-----|
| 232 | Th | thorium | 90 |
| [231] | Pa | protactinium | 91 |
| 238 | U | uranium | 92 |
| [237] | Np | neptunium | 93 |
| [242] | Pu | plutonium | 94 |
| [243] | Am | americium | 95 |
| [247] | Cm | curium | 96 |
| [245] | Bk | berkelium | 97 |
| [251] | Cf | californium | 98 |
| [254] | Es | einsteinium | 99 |
| [253] | Fm | fermium | 100 |
| [256] | Md | mendeleevium | 101 |
| [254] | No | nobelium | 102 |
| [257] | Lr | lawrencium | 103 |

DO NOT WRITE IN THIS AREA

DO NOT WRITE IN THIS AREA

DO NOT WRITE IN THIS AREA

